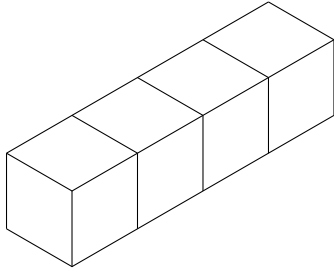
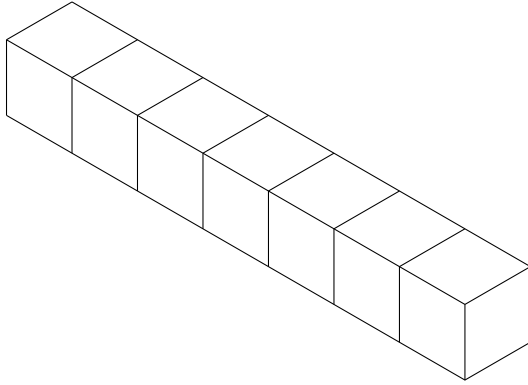


1. Write down the volume of this solid shape made from centimetre cubes.



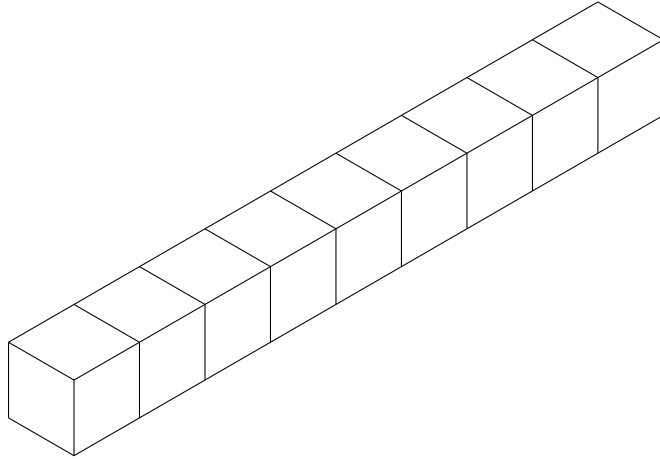
..... cm³

2. Write down the volume of this solid shape made from centimetre cubes.



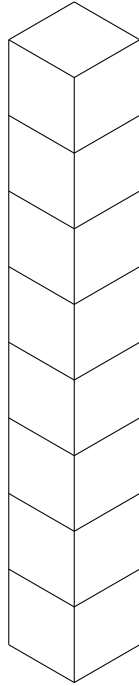
..... cm³

3. Write down the volume of this solid shape made from centimetre cubes.



..... cm³

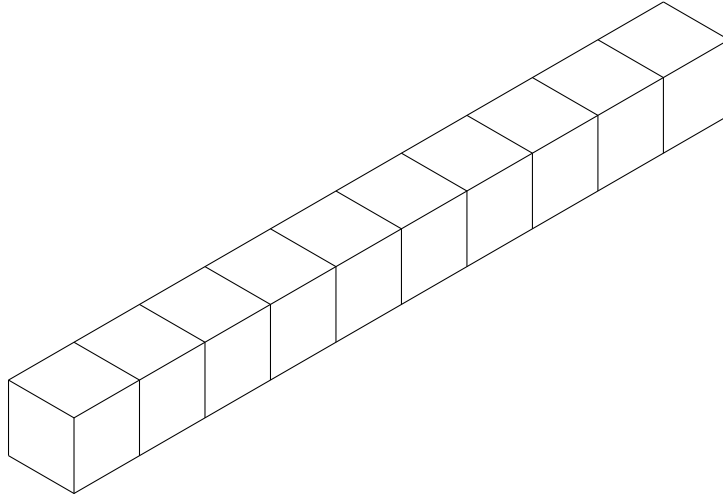
4. Write down the volume of this solid shape made from centimetre cubes.



Write down the volume of the solid shape.

..... cm³

5. Write down the volume of this solid shape made from centimetre cubes.



..... cm³

Answers

1. 4 cm^3

2. 7 cm^3

3. 9 cm^3

4. 8 cm^3

5. 10 cm^3