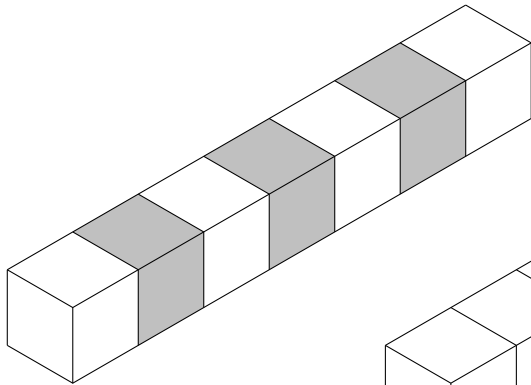
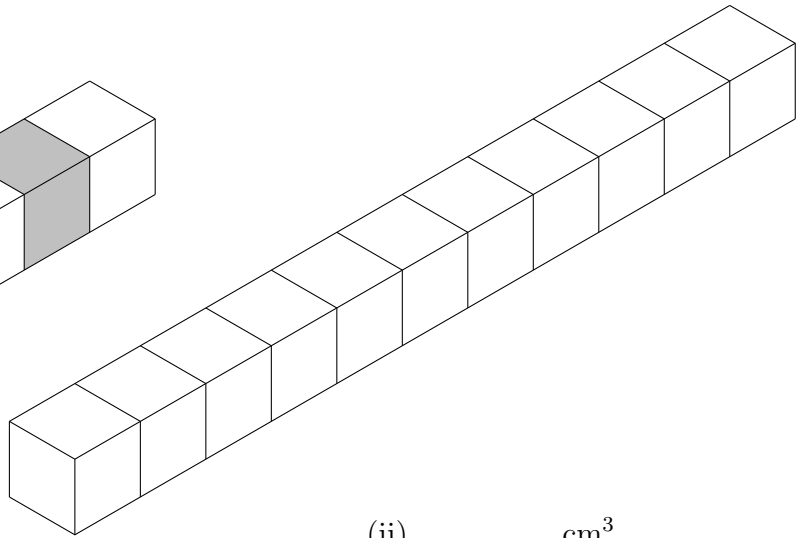


1. These cuboids are made from centimetre cubes.

Write down the volume of each cuboid.



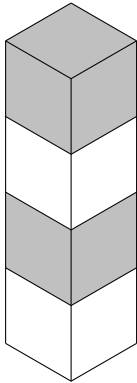
(i) cm^3



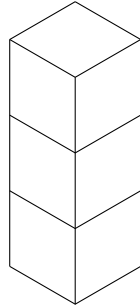
(ii) cm^3

2. These cuboids are made from centimetre cubes.

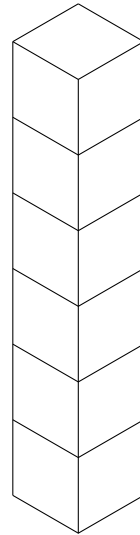
Write down the volume of each cuboid.



(i) cm^3



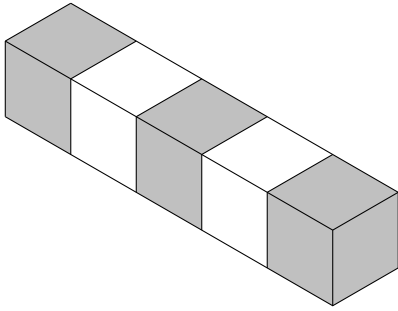
(ii) cm^3



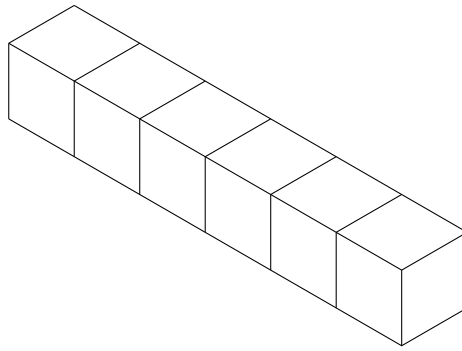
(iii) cm^3

3. These cuboids are made from centimetre cubes.

Write down the volume of each cuboid.



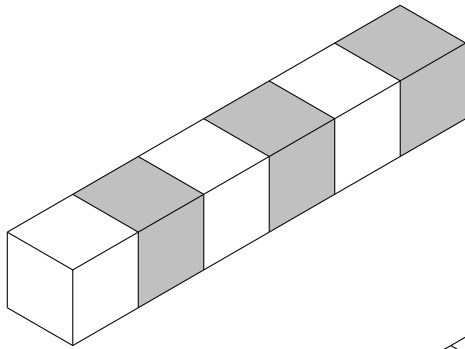
(i) cm^3



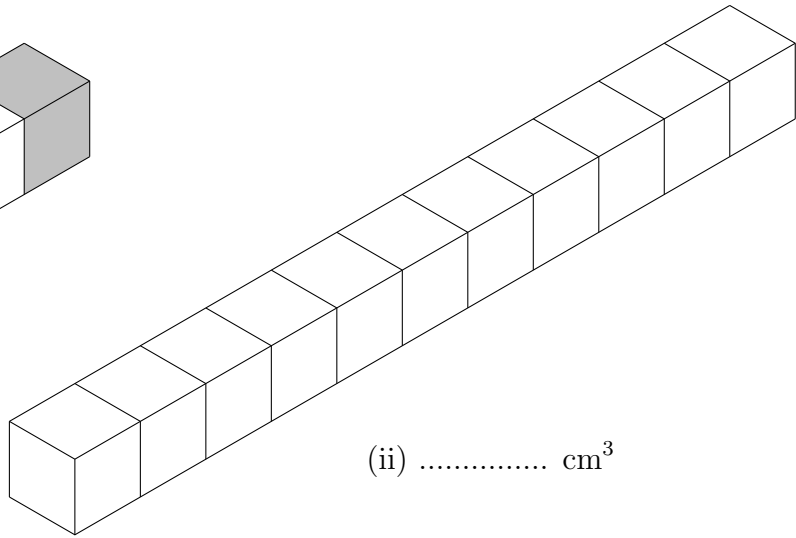
(ii) cm^3

4. These cuboids are made from centimetre cubes.

Write down the volume of each cuboid.



(i) cm^3



(ii) cm^3

Answers

1. (i) 7 cm^3 (ii) 11 cm^3
2. (i) 4 cm^3 (ii) 3 cm^3 (iii) 6 cm^3
3. (i) 5 cm^3 (ii) 6 cm^3
4. (i) 6 cm^3 (ii) 11 cm^3