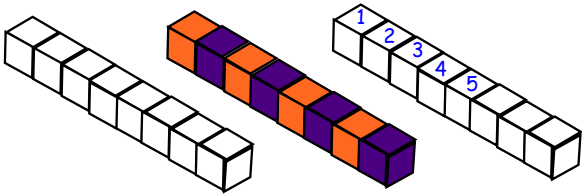
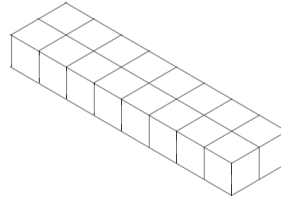


Is the volume easier to work out if

- the cubes are coloured?
- you write numbers on the top of each cube?

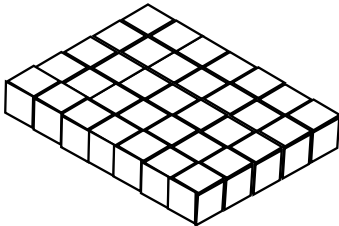


What is the volume of this cuboid?

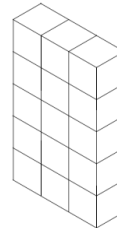


(see next page for an easy way to work it out)

What is the volume of this cuboid?



What is the volume of this cuboid?



What is the volume of this cuboid?

