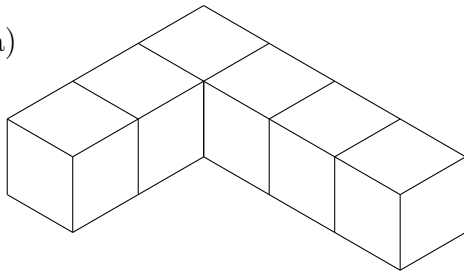


1. These solid shapes are made from centimetre cubes.

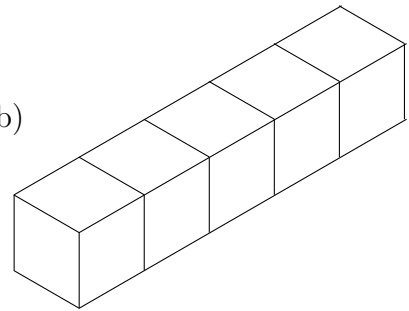
Write down the volume of each solid shape.

(a)



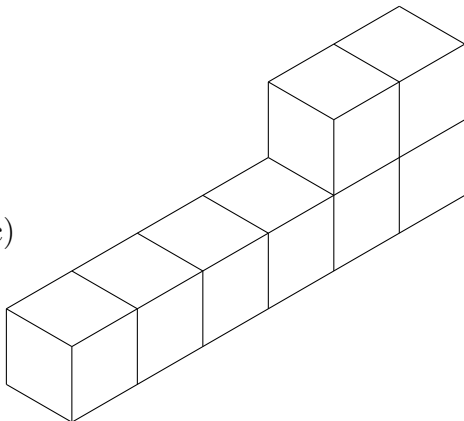
(a) cm^3

(b)



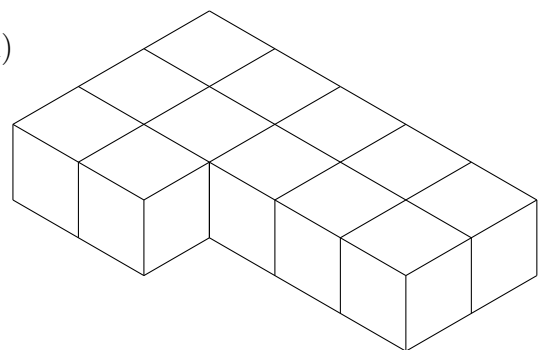
(b) cm^3

(c)



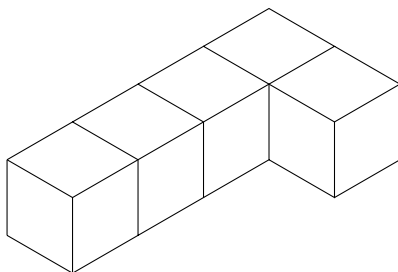
(c) cm^3

(d)



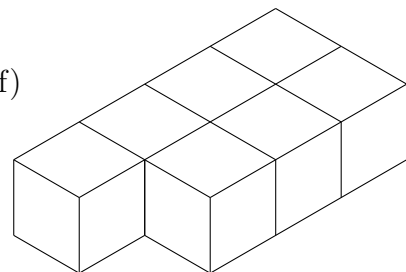
(d) cm^3

(e)



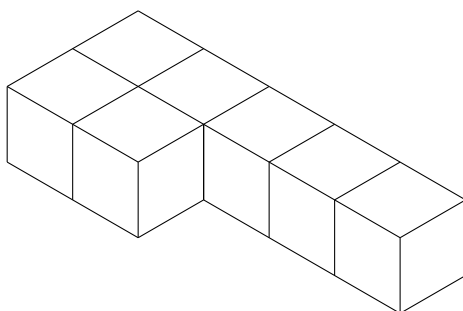
(e) cm^3

(f)



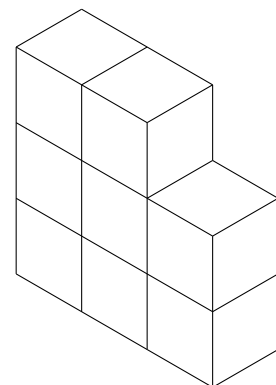
(f) cm^3

(g)



(g) cm^3

(h)



(h) cm^3

Answers 1a) 6 b) 5 c) 8 d) 12 e) 5 f) 7 g) 7 h) 8