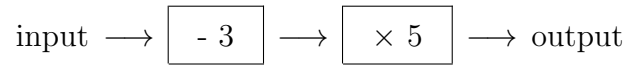


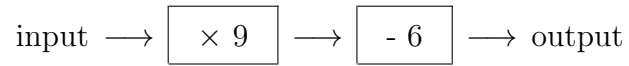
1. Here is a number machine



Work out the **output** when the input is 11

1.

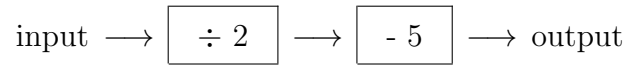
2. Here is a number machine



Work out the **output** when the input is 5

2.

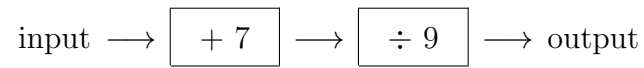
3. Here is a number machine



Work out the **output** when the input is 26

3.

4. Here is a number machine



Work out the **output** when the input is 20

4.

Answers

1. 40
2. 39
3. 8
4. 3