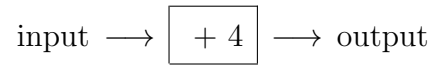


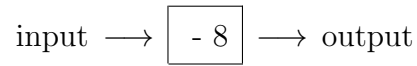
1. Here is a number machine



Work out the **output** when the input is 7

1.

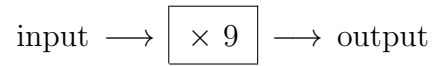
2. Here is a number machine



Work out the **output** when the input is 15

2.

3. Here is a number machine



Work out the **output** when the input is 4

3.

4. Here is a number machine

$$\text{input} \longrightarrow \boxed{\div 10} \longrightarrow \text{output}$$

Work out the **output** when the input is 70

4.

Answers

1. 11

2. 7

3. 36

4. 7