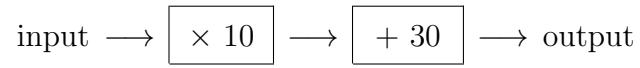


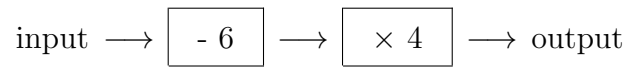
1. Here is a number machine



Work out the **input** when the output is 50

1.

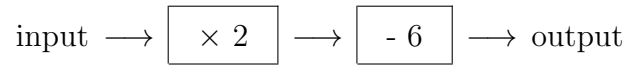
2. Here is a number machine



Work out the **input** when the output is 36

2.

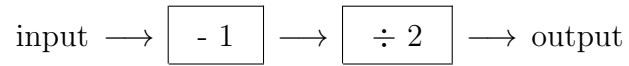
3. Here is a number machine



Work out the **input** when the output is 8

3.

4. Here is a number machine



Work out the **input** when the output is 12

4.

Answers

1. 2
2. 15
3. 7
4. 25