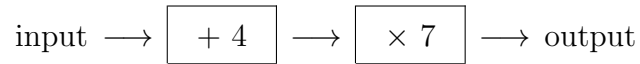


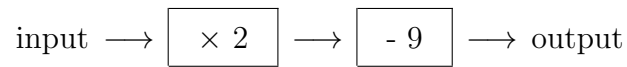
1. Here is a number machine



Complete this table for the number machine

| input | output |
|-------|--------|
| 4     | 56     |
| 5     |        |

2. Here is a number machine

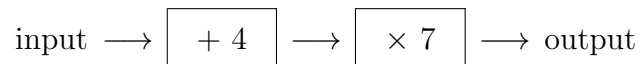


Work out the **output** when the input is 8

2. ....

numberMachine (8) Answers 1) 63 2) 7 3) 7 4) 12 5) 16

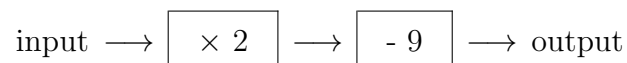
1. Here is a number machine



Complete this table for the number machine

| input | output |
|-------|--------|
| 4     | 56     |
| 5     |        |

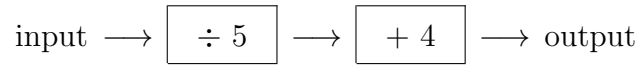
2. Here is a number machine



Work out the **output** when the input is 8

2. ....

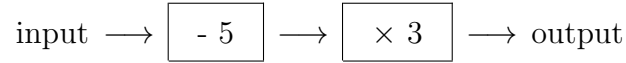
3. Here is a number machine



Work out the **output** when the input is 15

3. ....

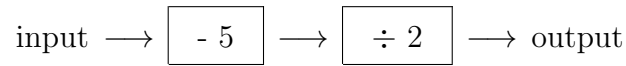
4. Here is a number machine



Work out the **output** when the input is 9

4. ....

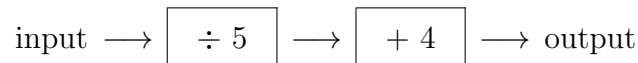
5. Here is a number machine



Work out the **output** when the input is 37

5. ....

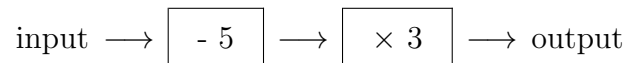
3. Here is a number machine



Work out the **output** when the input is 15

3. ....

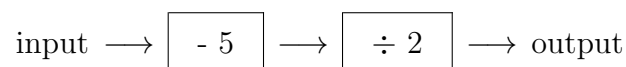
4. Here is a number machine



Work out the **output** when the input is 9

4. ....

5. Here is a number machine



Work out the **output** when the input is 37

5. ....