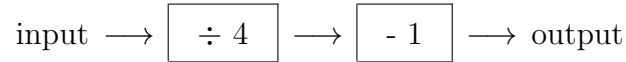


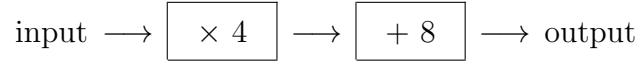
1. Here is a number machine



Work out the **input** when the output is 8

1.

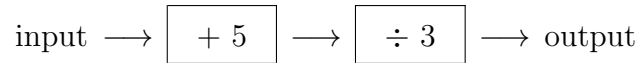
2. Here is a number machine



Work out the **input** when the output is 20

2.

3. Here is a number machine

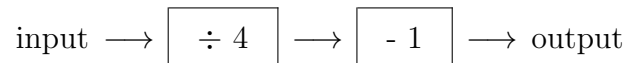


Work out the **input** when the output is 9

3.

numberMachine (10) Answers 1) 36 2) 3 3) 22 4) 2 5) 4 6) 30

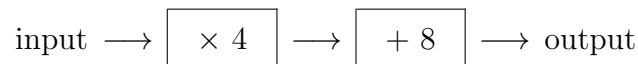
1. Here is a number machine



Work out the **input** when the output is 8

1.

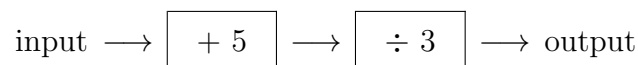
2. Here is a number machine



Work out the **input** when the output is 20

2.

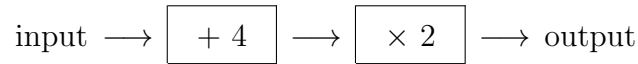
3. Here is a number machine



Work out the **input** when the output is 9

3.

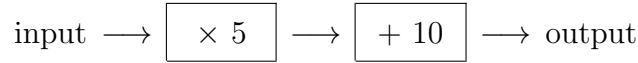
4. Here is a number machine



Work out the **input** when the output is 12

4.

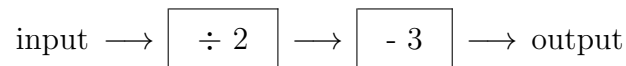
5. Here is a number machine



Work out the **input** when the output is 30

5.

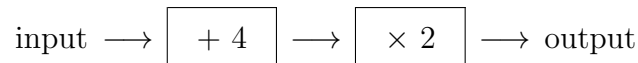
6. Here is a number machine



Work out the **input** when the output is 12

6.

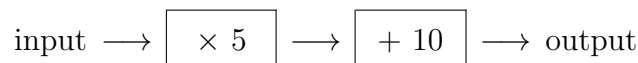
4. Here is a number machine



Work out the **input** when the output is 12

4.

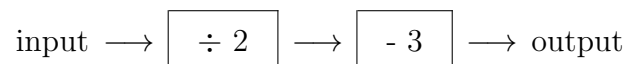
5. Here is a number machine



Work out the **input** when the output is 30

5.

6. Here is a number machine



Work out the **input** when the output is 12

6.