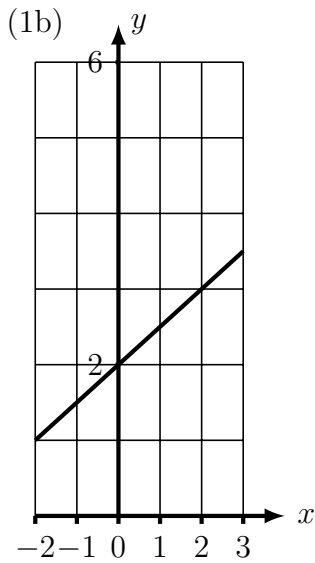


1. (a)

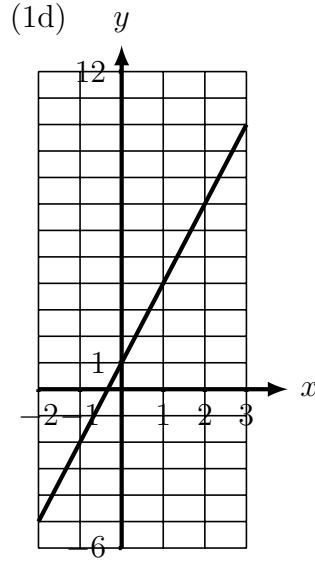
x	-2	-1	0	1	2	3
y	1	1.5	2	2.5	3	3.5

(c)

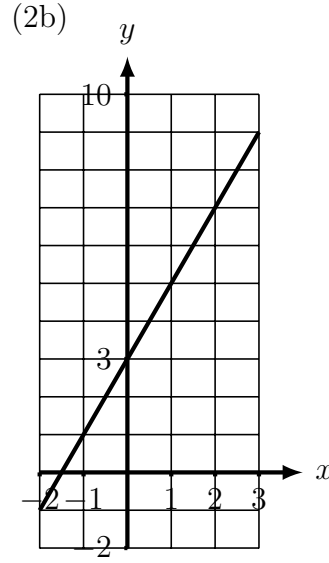
x	-2	-1	0	1	2	3
y	-5	-2	1	4	7	10



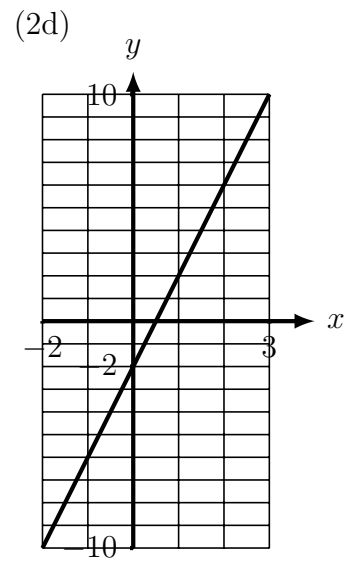
$$y = \frac{1}{2}x + 2$$



$$y = 3x + 1$$



$$y = 2x + 3$$



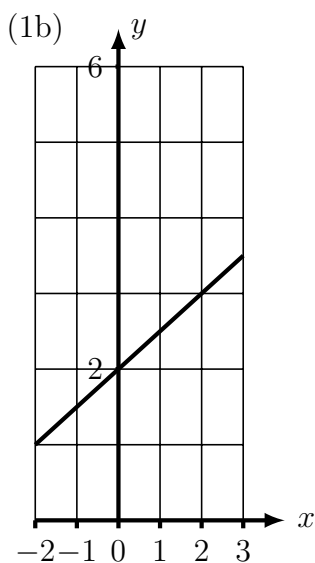
$$y = 4x - 2$$

1. (a)

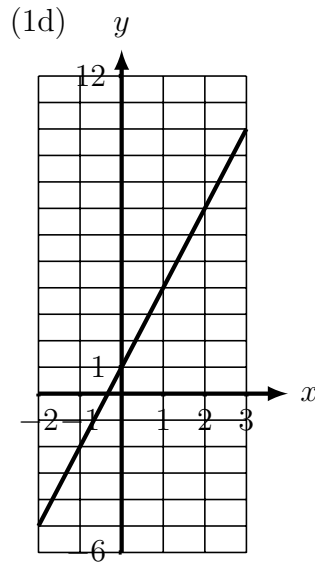
x	-2	-1	0	1	2	3
y	1	1.5	2	2.5	3	3.5

(c)

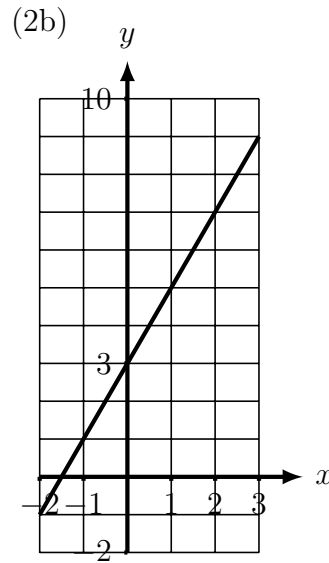
x	-2	-1	0	1	2	3
y	-5	-2	1	4	7	10



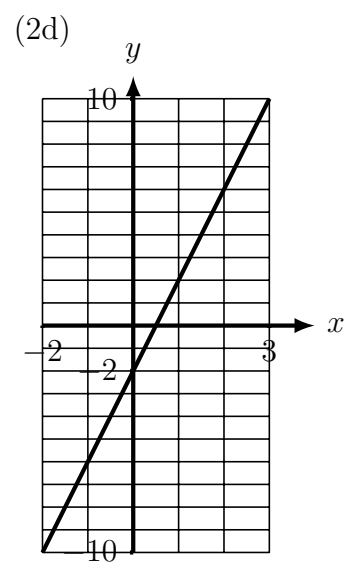
$$y = \frac{1}{2}x + 2$$



$$y = 3x + 1$$



$$y = 2x + 3$$



$$y = 4x - 2$$