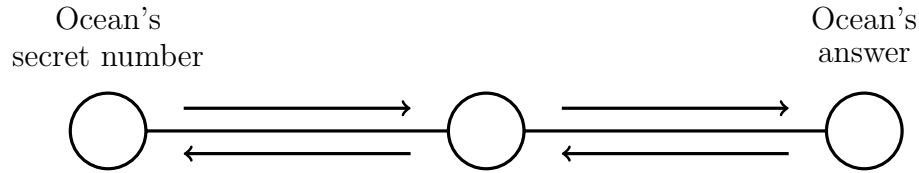


1. Ocean is thinking of a secret number.

She divides her secret number by 5, adds 11 and gets the answer 15

Write down Ocean's secret number.

You may complete the function diagram if it helps you.



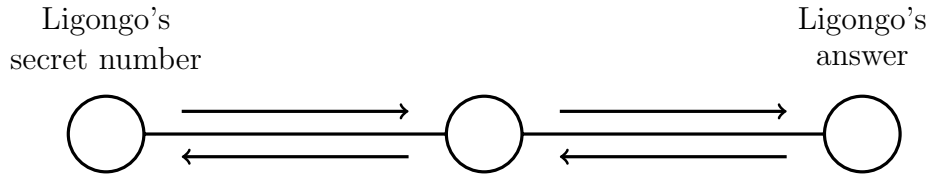
1.

2. Ligongo is thinking of a secret number.

He multiplies his secret number by 4, adds 8 and gets the answer 28

Write down Ligongo's secret number.

You may complete the function diagram if it helps you.



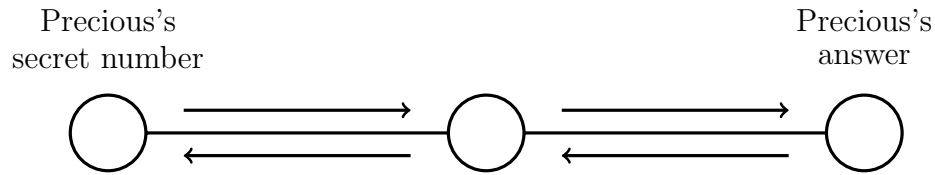
2.

3. Precious is thinking of a secret number.

She subtracts 14 from her secret number, multiplies this by 3 and gets the answer 6

Write down Precious's secret number.

You may complete the function diagram if it helps you.



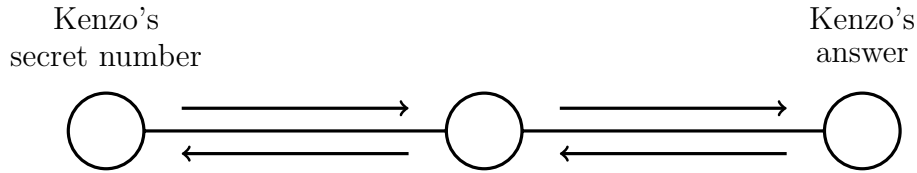
3.

4. Kenzo is thinking of a secret number.

He adds 4 to his secret number, divides this by 2 and gets the answer 12

Write down Kenzo's secret number.

You may complete the function diagram if it helps you.



4.

Answers

1. 20
2. 5
3. 16
4. 20