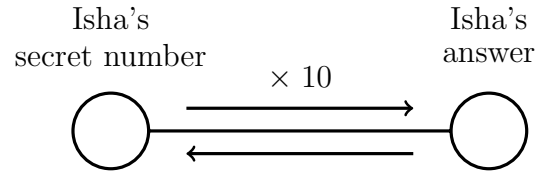
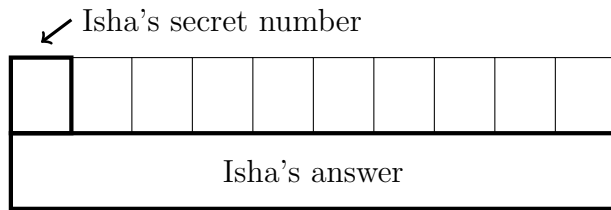


1. Isha is thinking of a secret number.

She multiplies her secret number by 10 and gets the answer 80

Write down Isha's secret number.

You may use the boxes diagram or the function diagram if they help you.



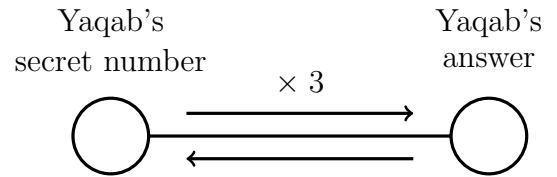
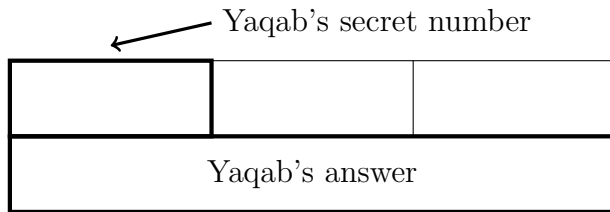
1. ....

2. Yaqab is thinking of a secret number.

He multiplies his secret number by 3 and gets the answer 18

Write down Yaqab's secret number.

You may use the boxes diagram or the function diagram if they help you.



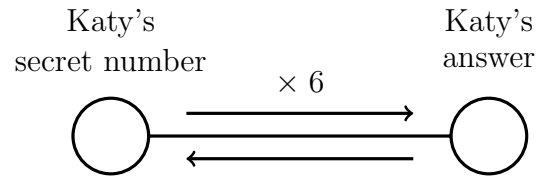
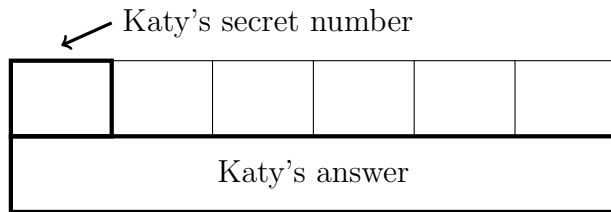
2. ....

3. Katy is thinking of a secret number.

She multiplies her secret number by 6 and gets the answer 24

Write down Katy's secret number.

You may use the boxes diagram or the function diagram if they help you.



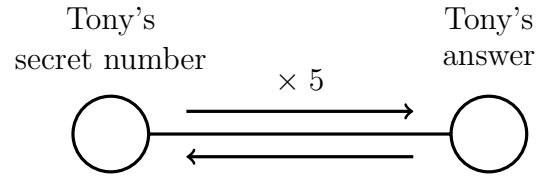
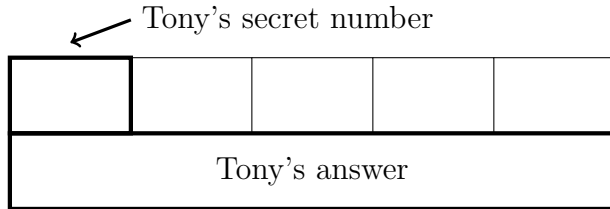
3. ....

4. Tony is thinking of a secret number.

He multiplies his secret number by 5 and gets the answer 40

Write down Tony's secret number.

You may use the boxes diagram or the function diagram if they help you.



4. ....

## Answers

1. Isha's is 8
2. Yaqab's is 6
3. Katy's is 4
4. Tony's is 8