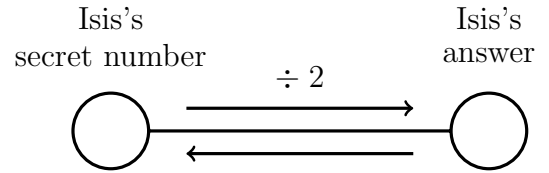



1. Isis is thinking of a secret number.

She divides her secret number by 2 and gets the answer 4.

Write down Isis's secret number.

You may use the boxes diagram or the function diagram if they help you.



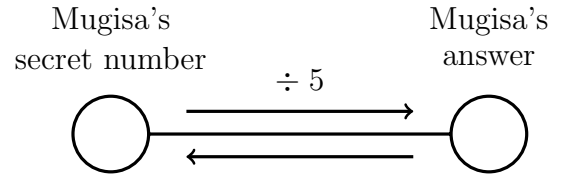
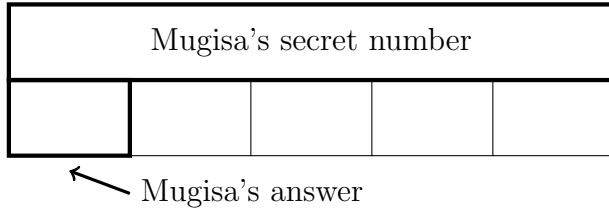
1. ....

2. Mugisa is thinking of a secret number.

He divides his secret number by 5 and gets the answer 8.

Write down Mugisa's secret number.

You may use the boxes diagram or the function diagram if they help you.



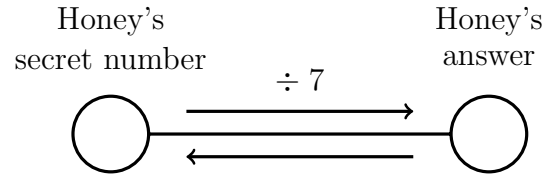
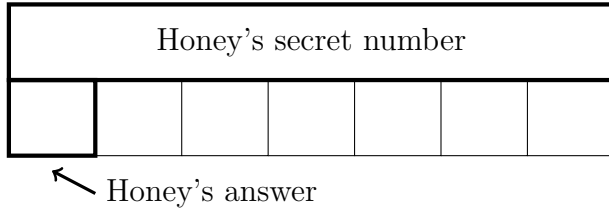
2. ....

3. Honey is thinking of a secret number.

She divides her secret number by 7 and gets the answer 4.

Write down Honey's secret number.

You may use the boxes diagram or the function diagram if they help you.



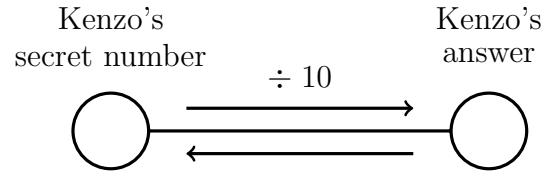
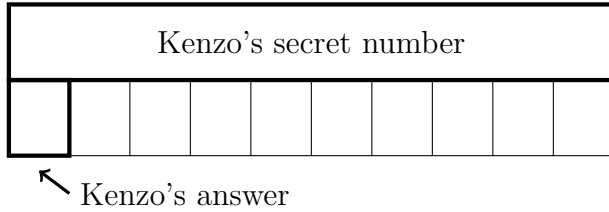
3. ....

4. Kenzo is thinking of a secret number.

He divides his secret number by 10 and gets the answer 8.

Write down Kenzo's secret number.

You may use the boxes diagram or the function diagram if they help you.



4. ....

## Answers

1. 8

2. 40

3. 28

4. 80