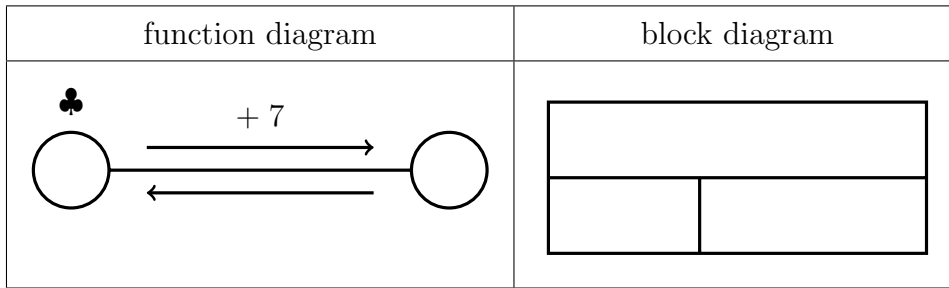


1. Complete the **function** diagram to solve $\clubsuit + 7 = 13$

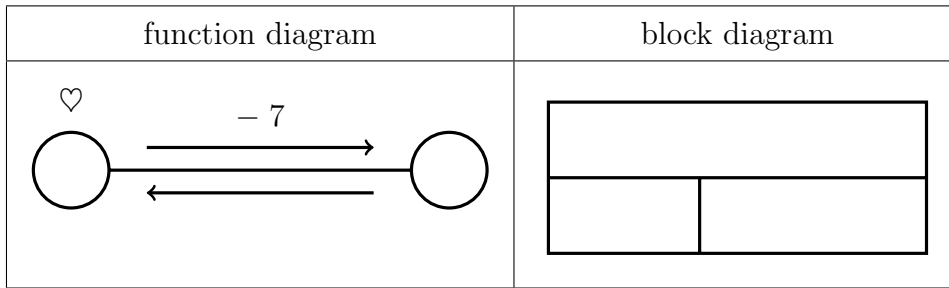
You may use the block diagram if it helps you.



$\clubsuit = \dots\dots\dots$

2. Complete the **function** diagram to solve $\heartsuit - 7 = 18$

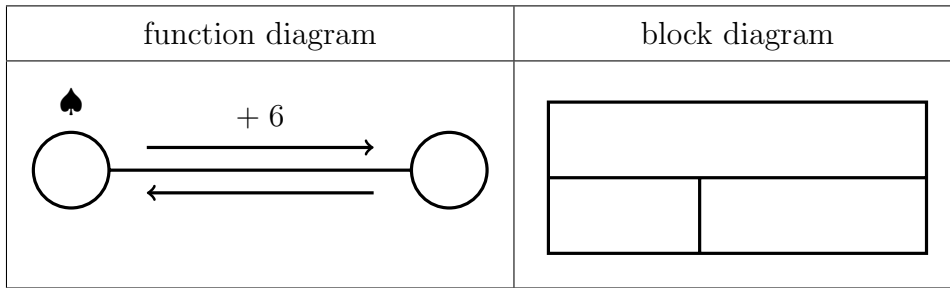
You may use the block diagram if it helps you.



$\heartsuit = \dots\dots\dots$

3. Complete the **function** diagram to solve ♠ + 6 = 17

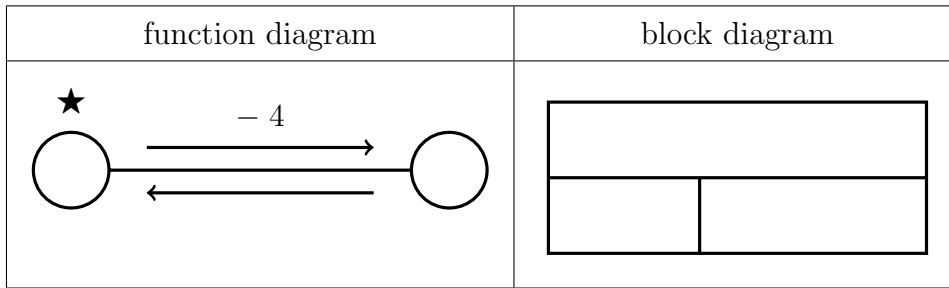
You may use the block diagram if it helps you.



♠ =

4. Complete the **function** diagram to solve $\star - 4 = 5$

You may use the block diagram if it helps you.



$\star = \dots\dots\dots$

Answers

1. ♣ = 6

2. ♥ = 25

3. ♠ = 11

4. ★ = 9