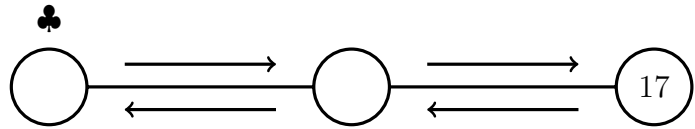


1. Complete the function diagram to solve

$$4 \clubsuit - 3 = 17$$

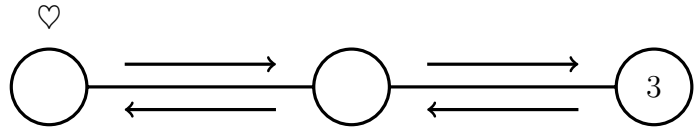
↑
×



$$\clubsuit = \dots\dots\dots$$

2. Complete the function diagram to solve

$$\div \longrightarrow \frac{\heartsuit}{2} - 2 = 3$$

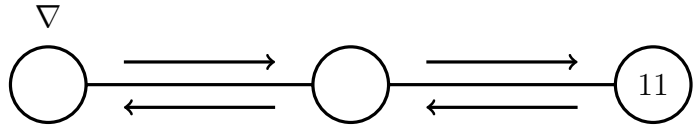


$\heartsuit = \dots\dots\dots$

3. Complete the function diagram to solve

$$7 \nabla - 3 = 11$$

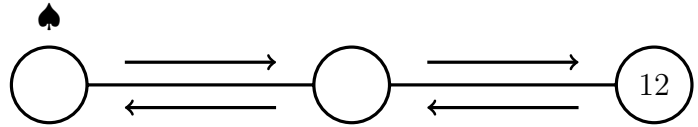
↑
×



$\nabla = \dots\dots\dots$

4. Complete the function diagram to solve

$$\div \longrightarrow \frac{\spadesuit}{6} + 2 = 12$$



$\spadesuit = \dots\dots\dots$

Answers

1. 5

2. 10

3. 2

4. 60