

1. Here is a square with perimeter 100 mm.




Diagram NOT
accurately drawn

Work out the side length of the square.

..... mm

2. The perimeter of a square is 4 cm.

Find the length, in centimeters, of one side of the square.

..... cm

shapeSkillsYC (4) Answers 1) 25 2) 1 3) 0.49 4) 1.21

1. Here is a square with perimeter 100 mm.




Diagram NOT
accurately drawn

Work out the side length of the square.

..... mm

2. The perimeter of a square is 4 cm.

Find the length, in centimeters, of one side of the square.

..... cm

3. The perimeter of PQRS = 1.96 m

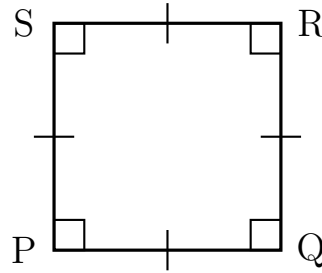


Diagram NOT accurately drawn

Work out the length of QR

..... m

4. Here is a square with a perimeter of 4.84 km.



Diagram NOT accurately drawn

Work out the length of one side of the square.

..... km

3. The perimeter of PQRS = 1.96 m

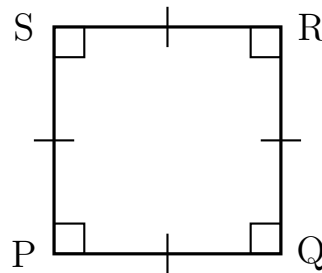


Diagram NOT accurately drawn

Work out the length of QR

..... m

4. Here is a square with a perimeter of 4.84 km.




Diagram NOT accurately drawn

Work out the length of one side of the square.

..... km