

1. Here is a rectangle.

Diagram NOT accurately drawn



6.7 cm

2.8 cm

Work out the area of the rectangle.

..... cm<sup>2</sup>

2. Here is diagram of a piece of forest land, which is in the shape of a rectangle.

3.9 km



15.7 km

Diagram NOT accurately drawn


Work out the area of the forest land.

..... km<sup>2</sup>

shapeSkillsYC (1) Answers 1) 18.76 2) 61.23 3) 124 800 4) 3430.4

1. Here is a rectangle.

Diagram NOT accurately drawn



6.7 cm


2.8 cm

Work out the area of the rectangle.

..... cm<sup>2</sup>

2. Here is diagram of a piece of forest land, which is in the shape of a rectangle.

3.9 km



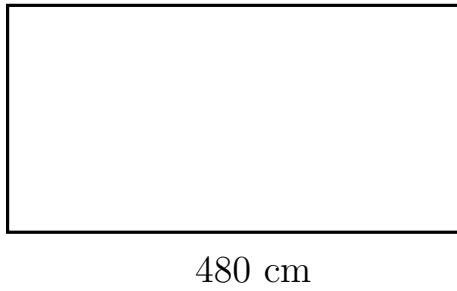
15.7 km

Diagram NOT accurately drawn

Work out the area of the forest land.

..... km<sup>2</sup>

3. Work out the area of this rectangle.



260 cm  
Diagram NOT accurately drawn

..... cm<sup>2</sup>

4. Here is a diagram of a fish pond.

The fish pond is in the shape of a rectangle.

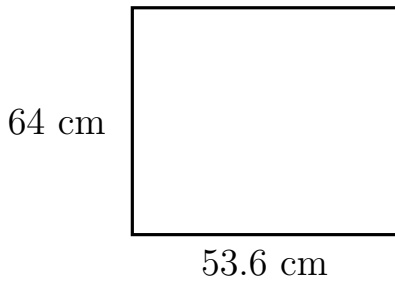
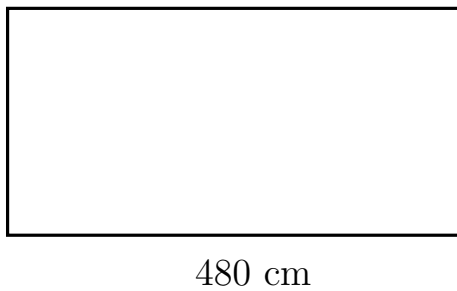


Diagram NOT accurately drawn

Work out the area of the fish pond.

..... cm<sup>2</sup>

3. Work out the area of this rectangle.



260 cm  
Diagram NOT accurately drawn

..... cm<sup>2</sup>

4. Here is a diagram of a fish pond.

The fish pond is in the shape of a rectangle.

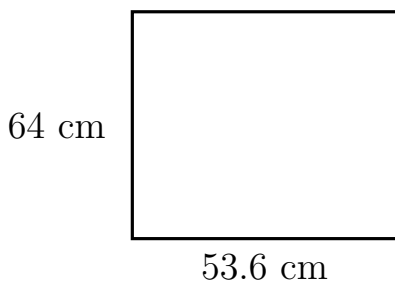


Diagram NOT accurately drawn

Work out the area of the fish pond.

..... cm<sup>2</sup>