

1. Here is a diagram of a playground.

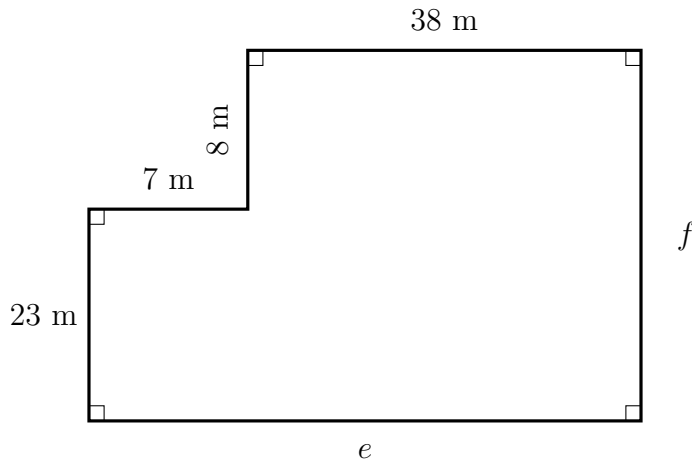


Diagram NOT
accurately drawn

Work out the length f

..... m

2. Here is a diagram of a forest.

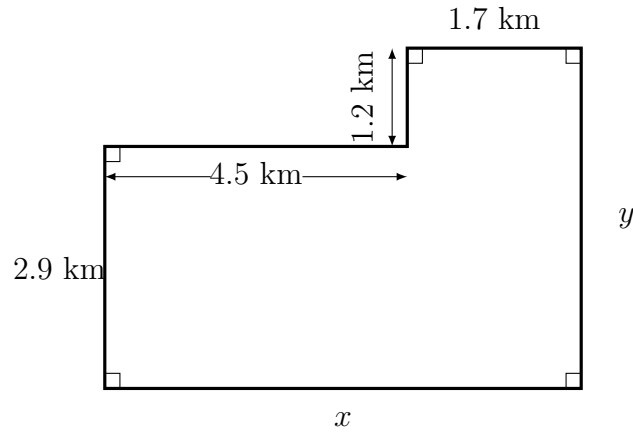


Diagram NOT
accurately drawn

Work out the length y

..... km

3. Here is a diagram of a car park.

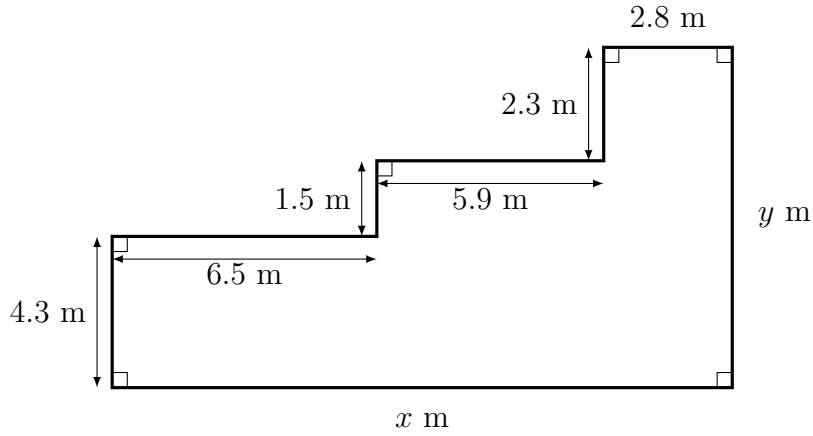


Diagram NOT
accurately drawn

Work out the length y

..... m

4. Here is a diagram of the floor of an office.

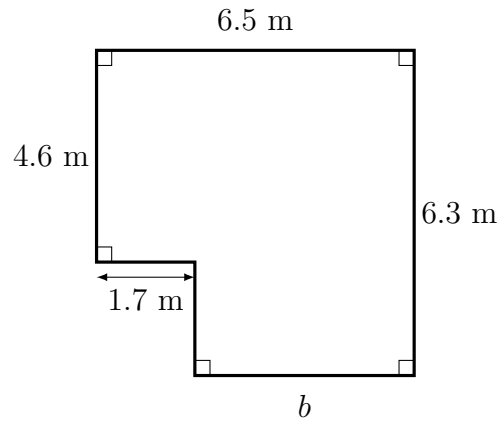


Diagram NOT
accurately drawn

Work out the length b

..... m

5. Here is a diagram of a living room floor.

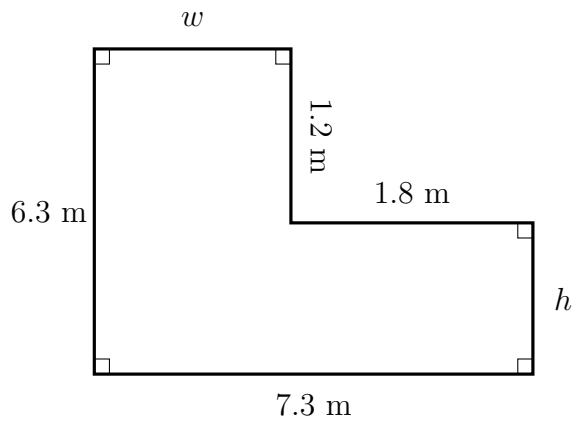


Diagram NOT
accurately drawn

Work out the length h

..... m

Answers

1. 31m
2. 4.1 km
3. 8.1 m
4. 4.8 m
5. 5.1 m