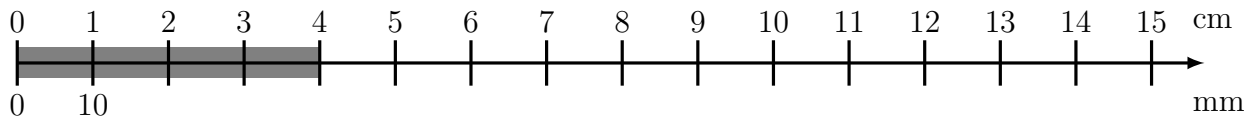
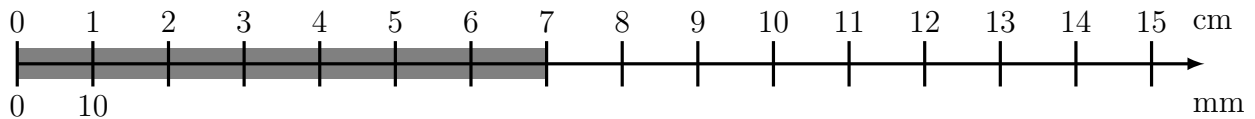


1. (a) Here are some incomplete conversion sticks, each measuring a thick grey line.



(i) Write down the length of the thick grey line in centimetres. . . . . cm

(ii) Write down the length of the thick grey line in millimetres. . . . . mm



(iii) Write down the length of the thick grey line in centimetres. . . . . cm

(iv) Write down the length of the thick grey line in millimetres. . . . . mm

(b) Complete these facts: (i) 11 cm = . . . . . mm

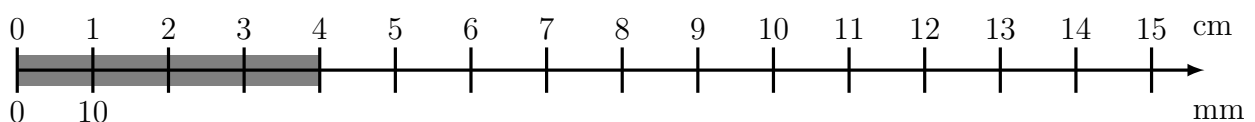
(ii) 14 cm = . . . . . mm

change Units (1) Answers 1. (a) (i) 4 cm, (ii) 40 mm, (iii) 7 cm, (iv) 70 mm,

1. (b) (i) 110 mm, (ii) 140 mm 2. (a) (i) 6 cm (ii) 60 mm (b) (i) 30 mm, (ii) 120 mm,

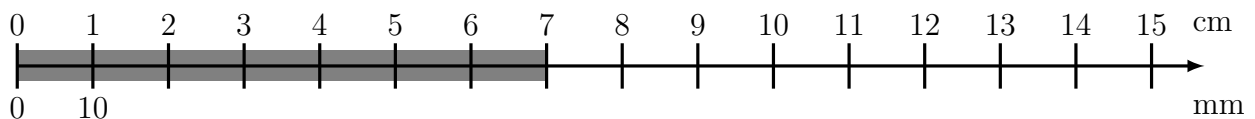
(iii) 100 mm, (iv) 90 mm, (v) 130 mm, (vi) 80 mm, (vii) 150 mm, (viii) 60 mm

1. (a) Here are some incomplete conversion sticks, each measuring a thick grey line.



(i) Write down the length of the thick grey line in centimetres. . . . . cm

(ii) Write down the length of the thick grey line in millimetres. . . . . mm



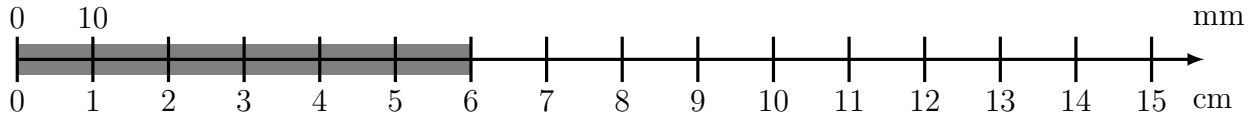
(iii) Write down the length of the thick grey line in centimetres. . . . . cm

(iv) Write down the length of the thick grey line in millimetres. . . . . mm

(b) Complete these facts: (i) 11 cm = . . . . . mm

(ii) 14 cm = . . . . . mm

2. (a) Here is an incomplete conversion stick measuring a thick grey line.



(i) Write down the length of the thick grey line in centimetres. . . . . cm

(ii) Write down the length of the thick grey line in millimetres. . . . . mm

(b) Complete these facts:

(i) 3 cm = . . . . . mm

(v) 13 cm = . . . . . mm

(ii) 12 cm = . . . . . mm

(vi) 8 cm = . . . . . mm

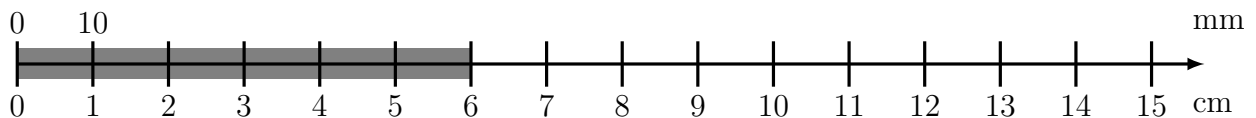
(iii) 10 cm = . . . . . mm

(vii) 15 cm = . . . . . mm

(iv) 9 cm = . . . . . mm

(viii) 6 cm = . . . . . mm

2. (a) Here is an incomplete conversion stick measuring a thick grey line.



(i) Write down the length of the thick grey line in centimetres. . . . . cm

(ii) Write down the length of the thick grey line in millimetres. . . . . mm

(b) Complete these facts:

(i) 3 cm = . . . . . mm

(v) 13 cm = . . . . . mm

(ii) 12 cm = . . . . . mm

(vi) 8 cm = . . . . . mm

(iii) 10 cm = . . . . . mm

(vii) 15 cm = . . . . . mm

(iv) 9 cm = . . . . . mm

(viii) 6 cm = . . . . . mm