

1. Here is a rectangle.

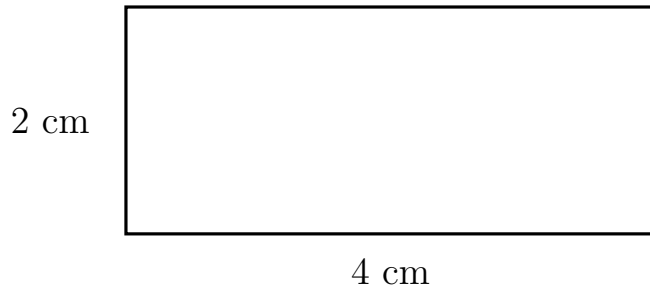


Diagram NOT
accurately drawn

Work out the area of the rectangle.

..... cm²

2. Here is a rectangle.

2 cm



Diagram NOT
accurately drawn

8 cm

Work out the area of the rectangle.

..... cm²

3. Here is a rectangle.

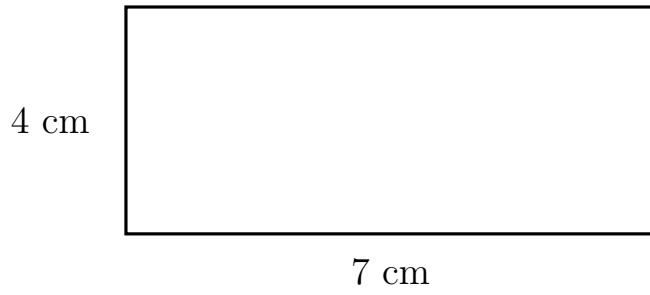


Diagram NOT
accurately drawn

Work out the area of the rectangle.

..... cm²

4. Here is a rectangle.



1 cm

Diagram NOT
accurately drawn

7 cm

Work out the area of the rectangle.

..... cm²

5. Here is a rectangle.

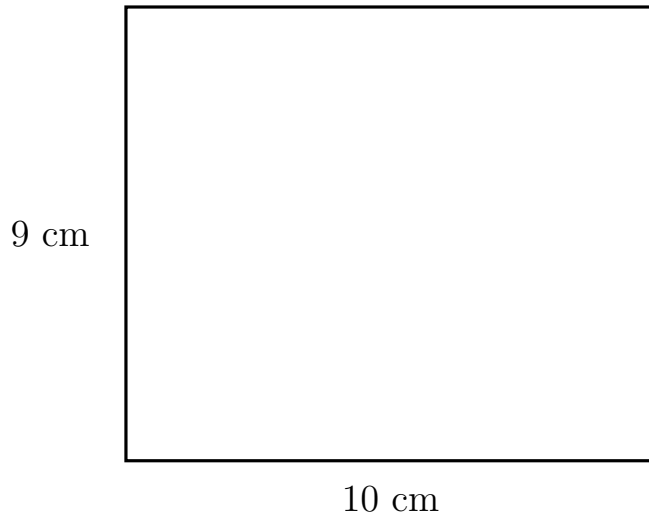


Diagram NOT
accurately drawn

Work out the area of the rectangle.

..... cm²

6. Here is a rectangle.



2 cm

Diagram NOT
accurately drawn

6 cm

Work out the area of the rectangle.

..... cm²

7. Here is a rectangle.

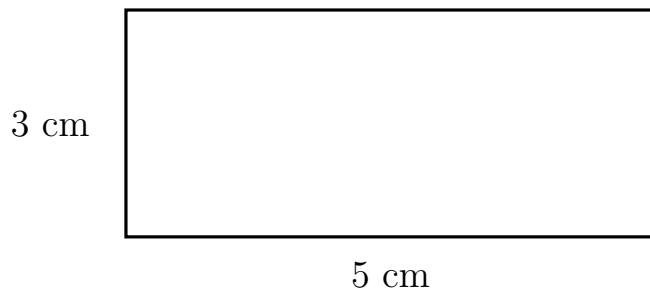


Diagram NOT
accurately drawn

Work out the area of the rectangle.

..... cm²

8. Here is a rectangle.

1 cm



Diagram NOT
accurately drawn

8 cm

Work out the area of the rectangle.

..... cm²

Answers

1. 8 cm^2

2. 16 cm^2

3. 28 cm^2

4. 7 cm^2

5. 90 cm^2

6. 12 cm^2

7. 15 cm^2

8. 8 cm^2