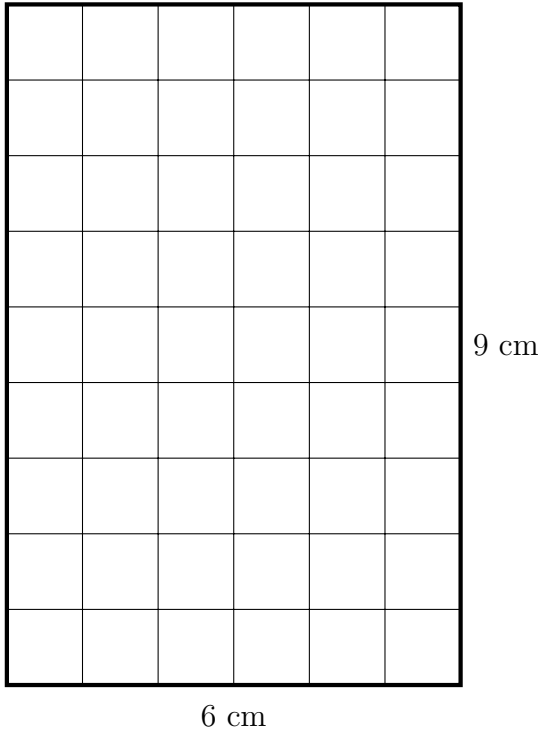


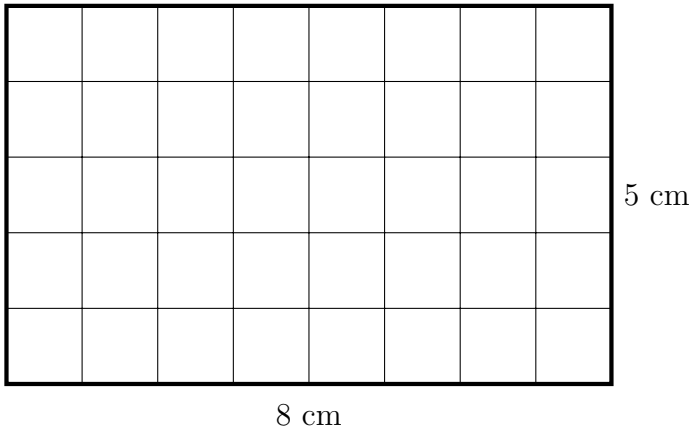
1. Work out the area of these rectangles.

You may use this multiplication table.

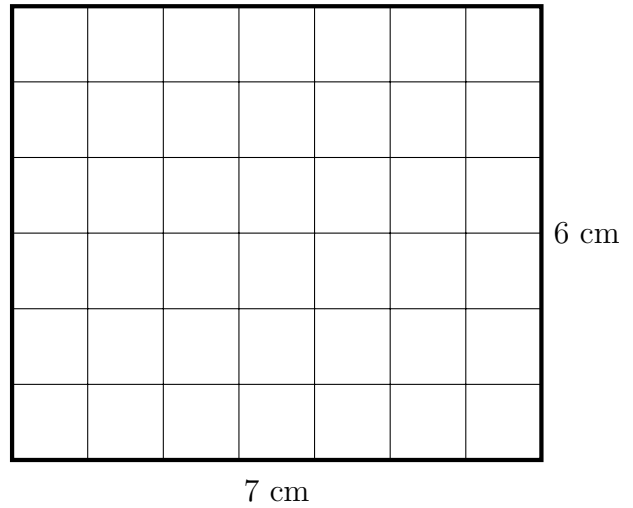


×	2	3	4	5	6	7	8	9	10
2	4	6	8	10	12	14	16	18	20
3	6	9	12	15	18	21	24	27	30
4	8	12	16	20	24	28	32	36	40
5	10	15	20	25	30	35	40	45	50
6	12	18	24	30	36	42	48	54	60
7	14	21	28	35	42	49	56	63	70
8	16	24	32	40	48	56	64	72	80
9	18	27	36	45	54	63	72	81	90
10	20	30	40	50	60	70	80	90	100

area = cm²




area = cm²



area = cm²

2. Work out the area of these rectangles.

You may use this multiplication table.

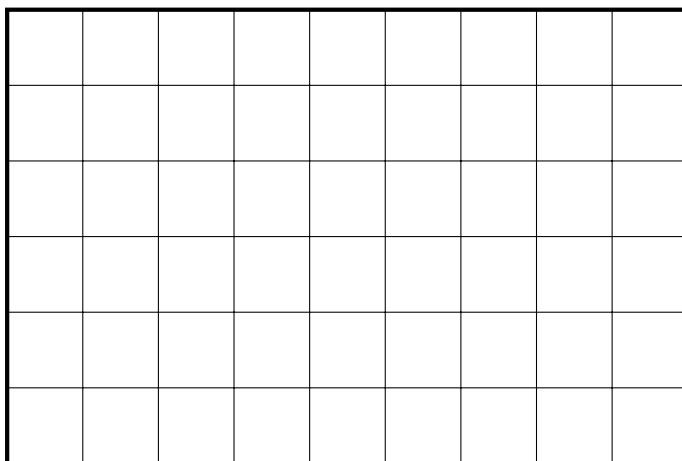


9 cm

8 cm

×	2	3	4	5	6	7	8	9	10
2	4	6	8	10	12	14	16	18	20
3	6	9	12	15	18	21	24	27	30
4	8	12	16	20	24	28	32	36	40
5	10	15	20	25	30	35	40	45	50
6	12	18	24	30	36	42	48	54	60
7	14	21	28	35	42	49	56	63	70
8	16	24	32	40	48	56	64	72	80
9	18	27	36	45	54	63	72	81	90
10	20	30	40	50	60	70	80	90	100

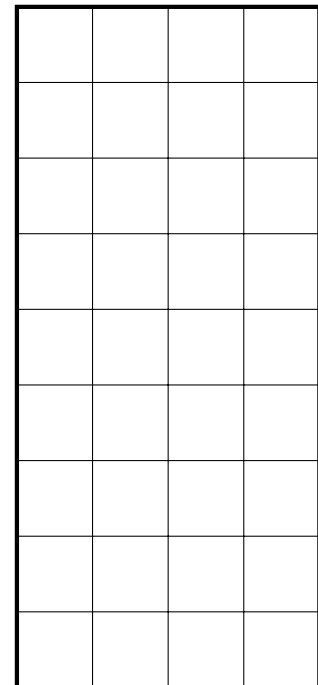
area = cm²



6 cm

9 cm

area = cm²



9 cm

4 cm

area = cm²

Answers

1. top: 54 cm^2

left: 40 cm^2 right: 42 cm^2

2. top: 72 cm^2

left: 54 cm^2 right: 36 cm^2