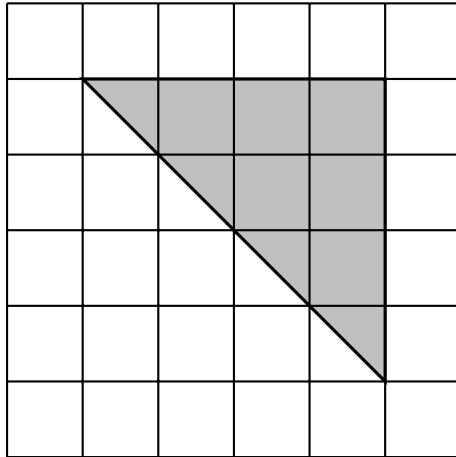


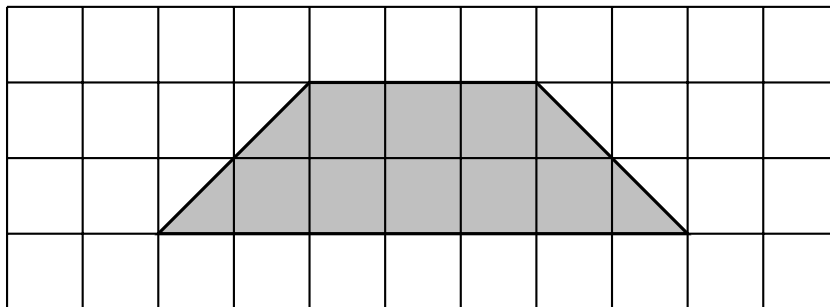
1. Here is a triangle on a centimetre grid.



Find the area of the shaded triangle.

..... cm<sup>2</sup>

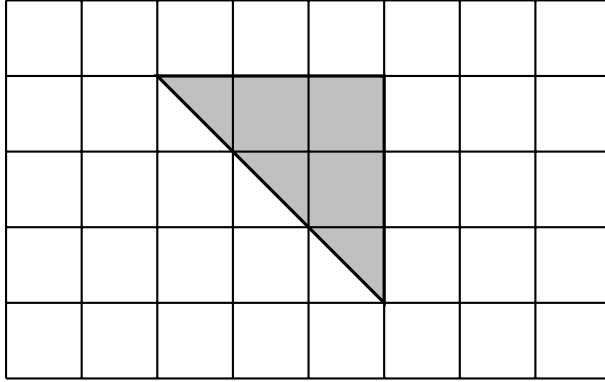
2. Here is a trapezium on a centimetre grid.



Find the area of the shaded trapezium.

..... cm<sup>2</sup>

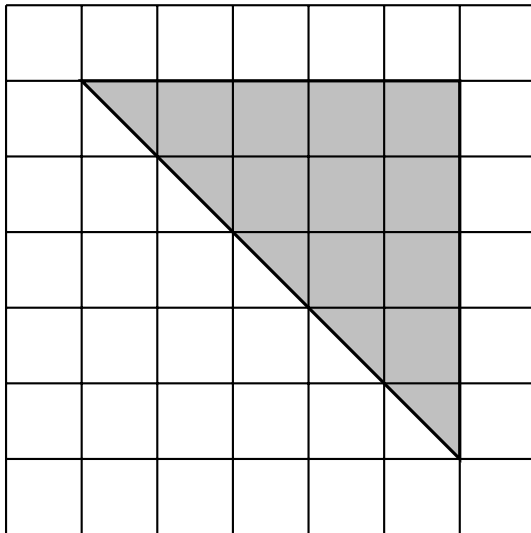
3. Here is a triangle on a centimetre grid.



Find the area of the shaded triangle.

..... cm<sup>2</sup>

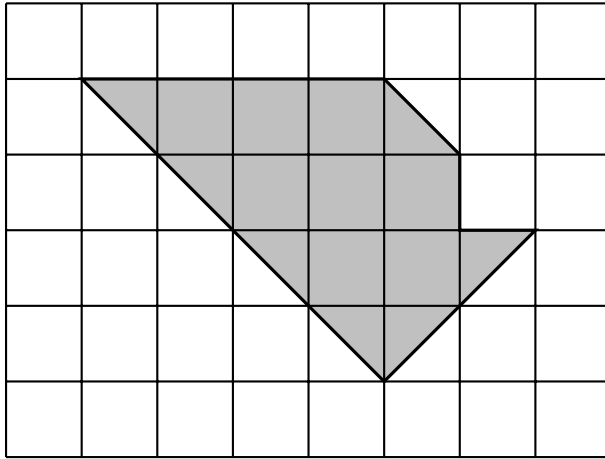
4. Here is a triangle on a centimetre grid.



Find the area of the shaded triangle.

..... cm<sup>2</sup>

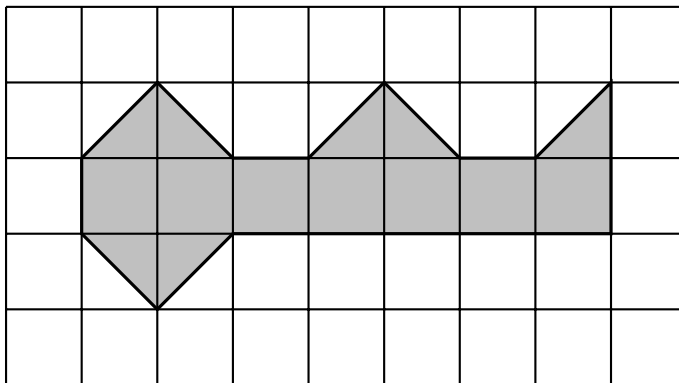
5. Here is a shape on a centimetre grid.



Find the area of the shaded shape.

..... cm<sup>2</sup>

6. Here is a shape on a centimetre grid.



Find the area of the shaded shape.

..... cm<sup>2</sup>

## Answers

1. ....**8**..... cm<sup>2</sup>
2. ....**10**..... cm<sup>2</sup>
3. ....**4,5**..... cm<sup>2</sup>
4. ....**12.5**..... cm<sup>2</sup>
5. ....**11.5**..... cm<sup>2</sup>
6. ....**10.5**..... cm<sup>2</sup>