


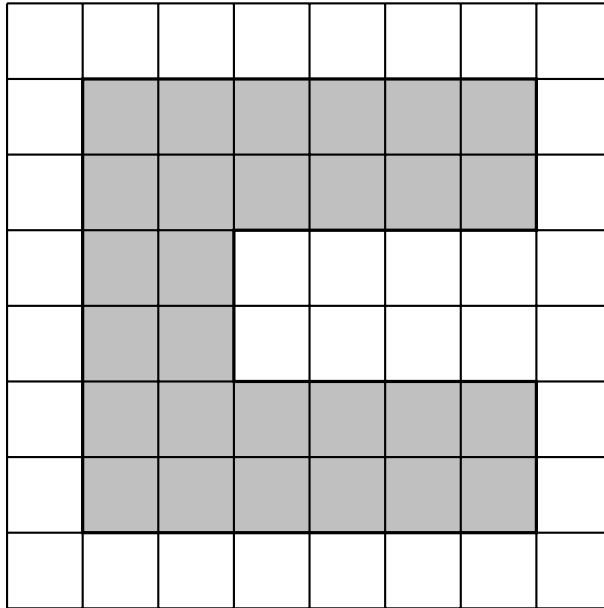
1. The shaded shape is drawn on a grid of centimetre squares.



Find the area of the shaded shape.

..... cm^2

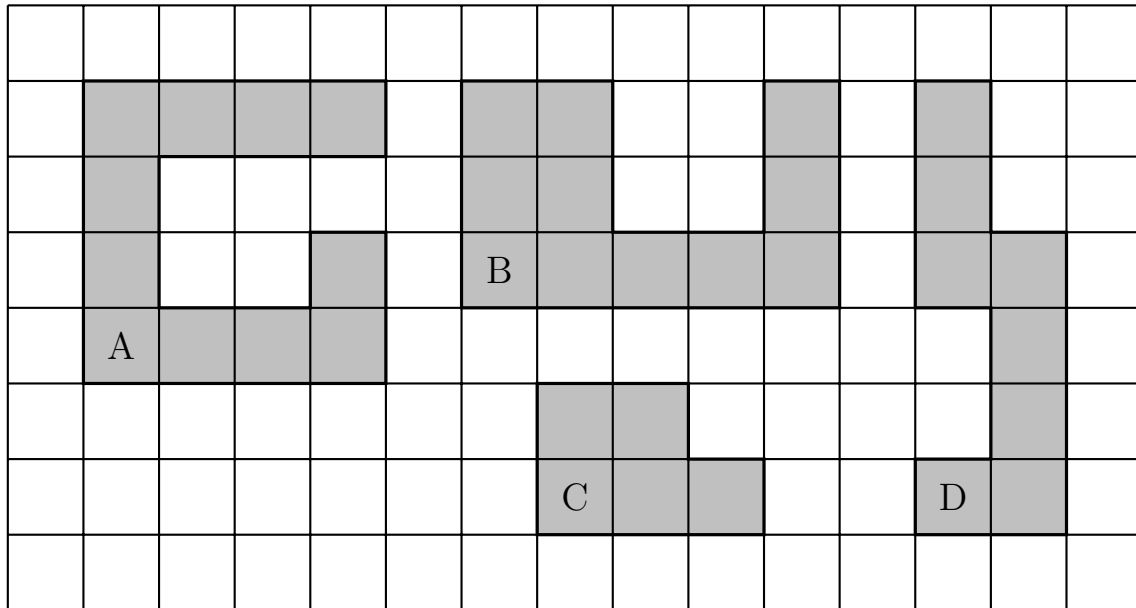
2. The shaded shape is drawn on a grid of centimetre squares.



Find the area of the shaded shape.

..... cm^2

3. These shapes have been drawn on a grid of centimetre squares.



Find the area of shape A cm^2

Find the area of shape B cm^2

Find the area of shape C cm^2

Find the area of shape D cm^2

Answers

1. 7 cm^2

2. 28 cm^2

3. A: 11 cm^2

B: 11 cm^2

C: 5 cm^2

D: 8 cm^2