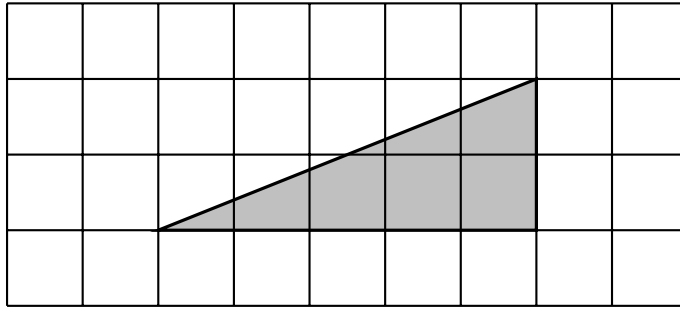


1. Here is a triangle on a centimetre grid.



Find the area of the shaded triangle.

..... cm²

2. Here is a right angled triangle.

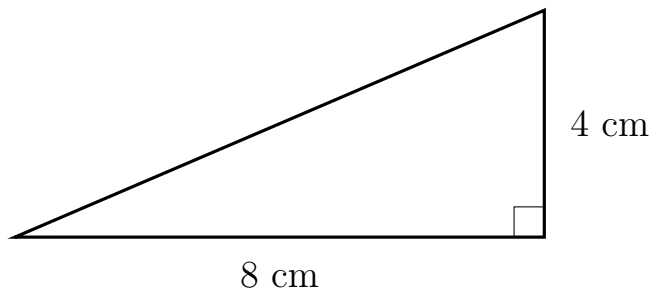
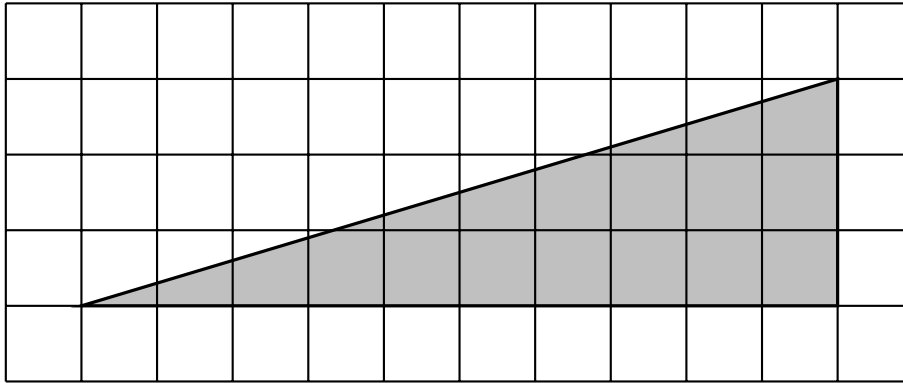


Diagram NOT accurately drawn

Work out the area of the right angled triangle.

..... cm²

3. Here is a triangle on a centimetre grid.



Find the area of the shaded triangle.

..... cm²

4. Here is a triangle.

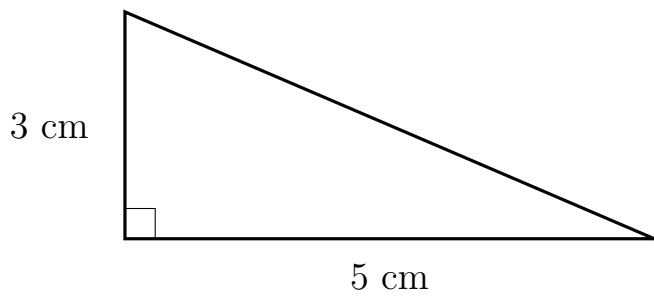
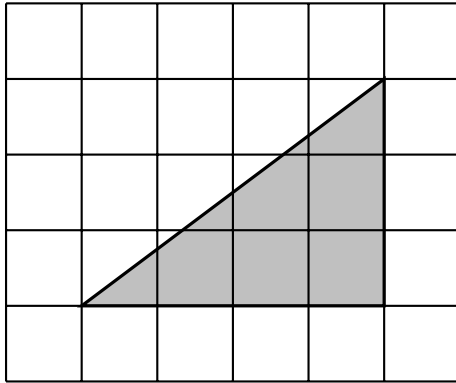


Diagram NOT accurately drawn

Work out the area of the triangle.

..... cm²

5. Here is a triangle on a centimetre grid.



Find the area of the shaded triangle.

..... cm²

6. Here is a triangle.

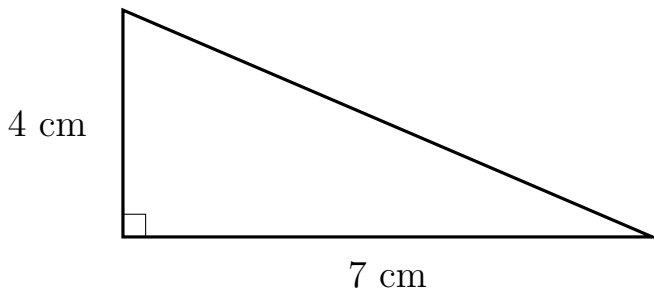


Diagram NOT accurately drawn

Work out the area of the triangle.

..... cm²

7. Here is a triangle.

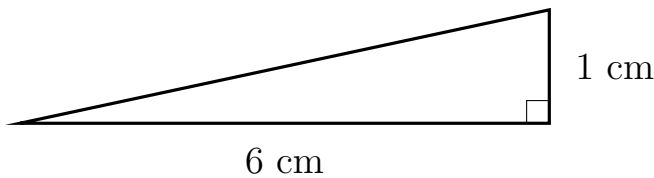


Diagram NOT accurately drawn

Work out the area of the triangle.

..... cm²

Answers

1. 5 cm^2

2. 16 cm^2

3. 15 cm^2

4. 7.5 cm^2

5. 6 cm^2

6. 14 cm^2

7. 3 cm^2