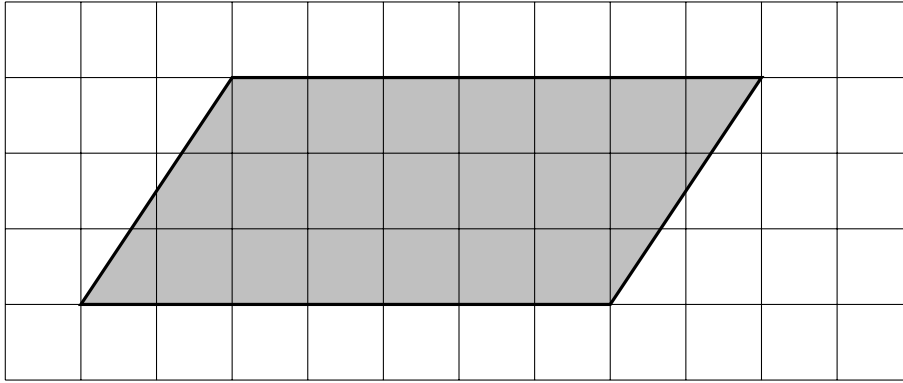


1. Here is a parallelogram on a centimetre grid.



Work out the area of the shaded parallelogram.

..... cm^2

2. Here is a parallelogram.

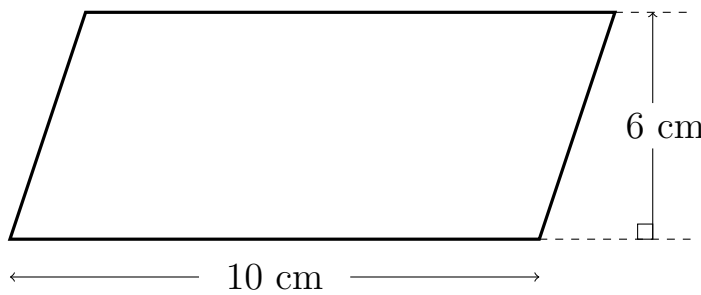
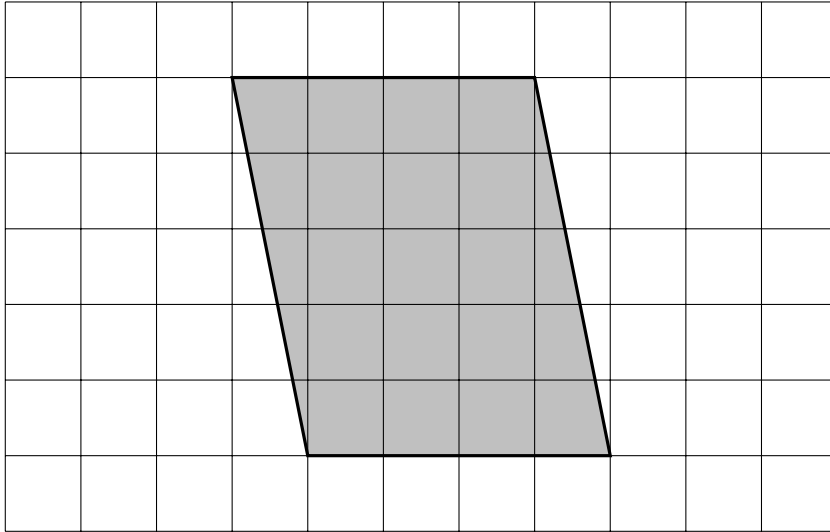


Diagram NOT accurately drawn

Work out the area of the parallelogram.

..... cm^2

3. Here is a parallelogram on a centimetre grid.



Work out the area of the shaded parallelogram.

..... cm^2

4. Here is a parallelogram.

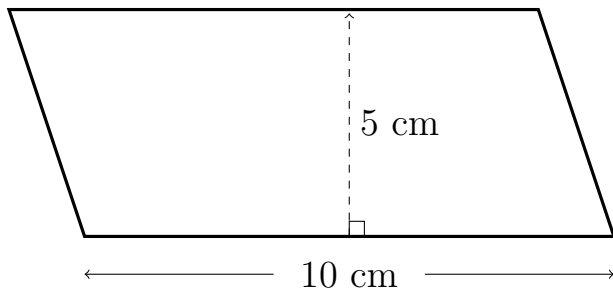


Diagram NOT accurately drawn

Work out the area of the parallelogram.

..... cm^2

5. Here is a parallelogram.

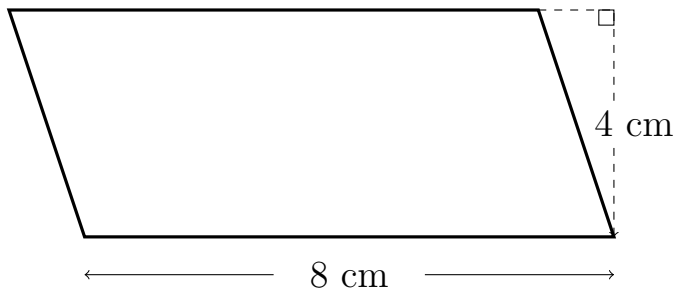


Diagram NOT accurately drawn

The perpendicular height of the parallelogram is 4 cm.
 Work out the area of the parallelogram.

..... cm^2

6. Here is a parallelogram.

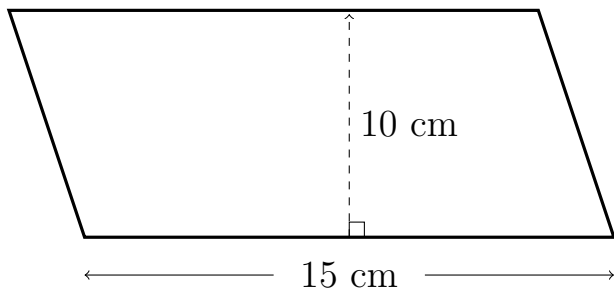


Diagram NOT accurately drawn

Work out the area of the parallelogram.

..... cm^2

Answers

1. 21 cm^2
2. 60 cm^2
3. 20 cm^2
4. 50 cm^2
5. 32 cm^2
6. 150 cm^2