


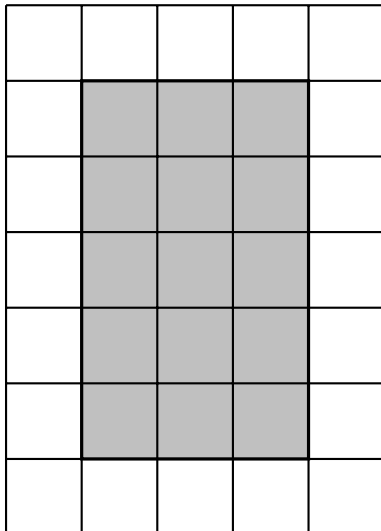
1. Here is a rectangle on a centimetre grid.



Find the area of the shaded rectangle.

..... cm^2

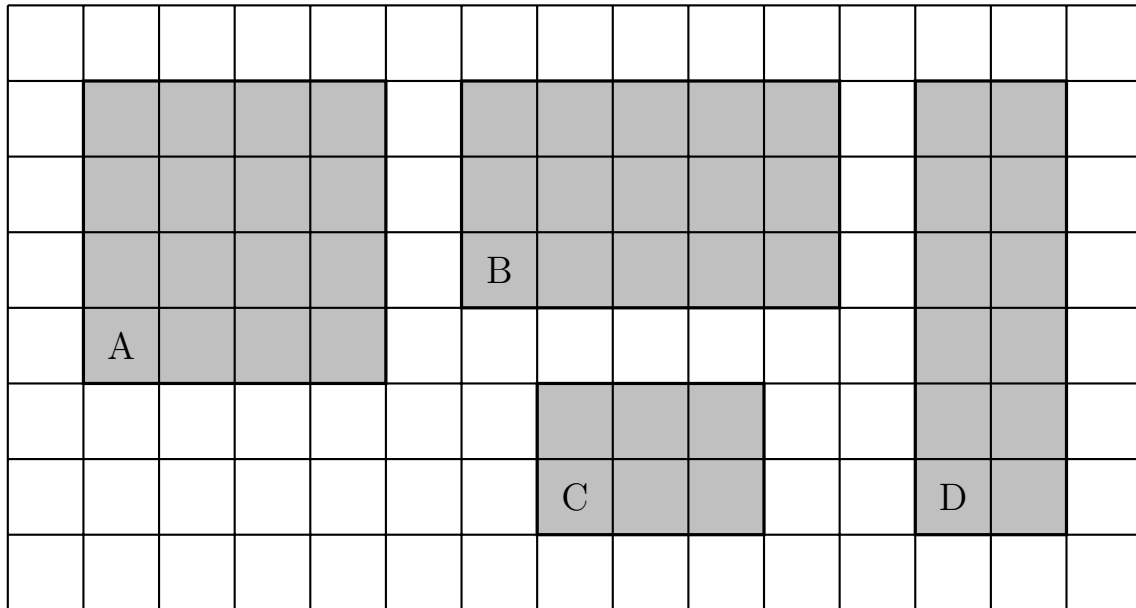
2. Here is a rectangle on a centimetre grid.



Find the area of the shaded rectangle.

..... cm^2

3. These rectangles have been drawn on a grid of centimetre squares.



Find the area of rectangle A cm^2

Find the area of rectangle B cm^2

Find the area of rectangle C cm^2

Find the area of rectangle D cm^2

Answers

1.**18**..... cm^2
2.**15**..... cm^2
3. A) 16 cm^2
B) 15 cm^2
C) 6 cm^2
D) 12 cm^2