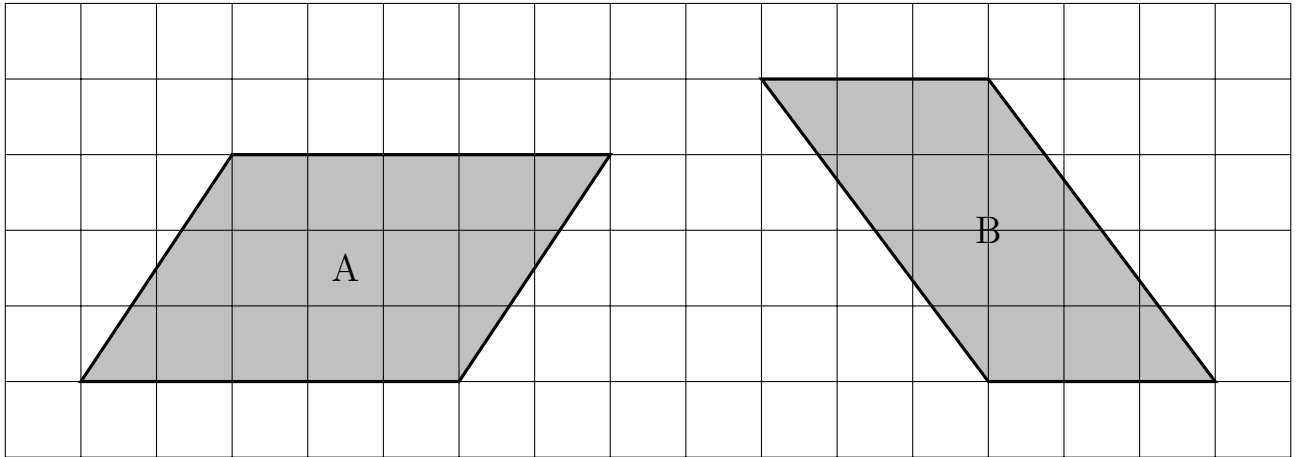


1. Here are two parallelograms on a centimetre grid.



(a) Work out the area of parallelogram A.

.....  $cm^2$

(b) Work out the area of parallelogram B.

.....  $cm^2$

2. Here is a parallelogram.

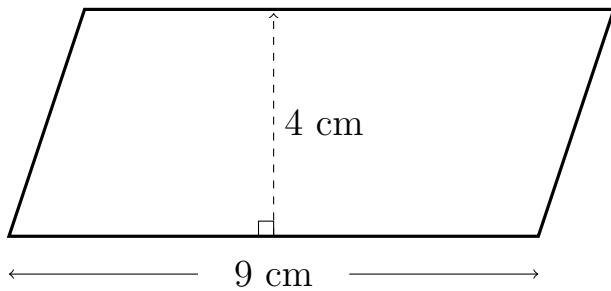


Diagram NOT accurately drawn

Work out the area of the parallelogram.

.....  $cm^2$

3. Here is a parallelogram.

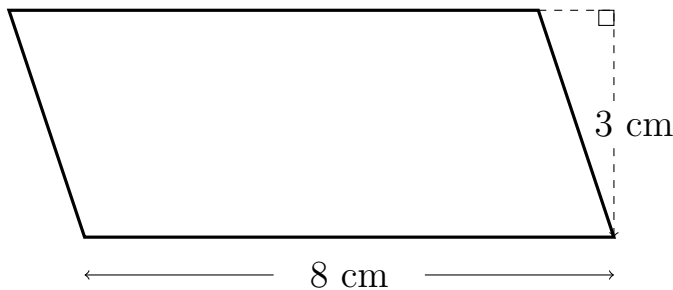


Diagram NOT accurately drawn

The perpendicular height of the parallelogram is 3 cm.

Work out the area of the parallelogram.

.....  $cm^2$

Answers 1a) 15    1b) 12    2) 36    3) 24