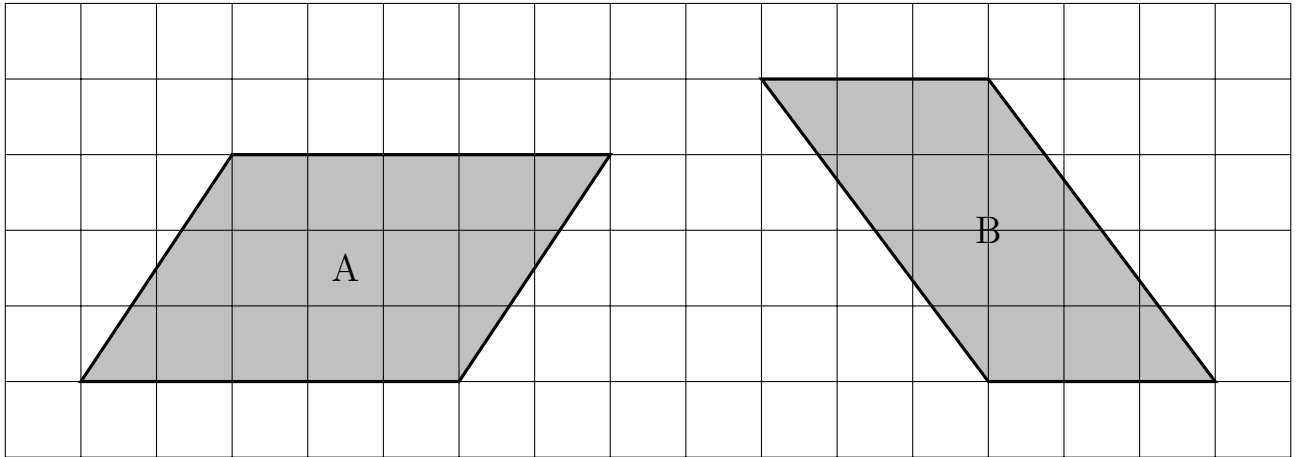


1. Here are two parallelograms on a centimetre grid.



(a) Work out the area of parallelogram A.

..... cm^2

(b) Work out the area of parallelogram B.

..... cm^2

2. Here is a parallelogram.

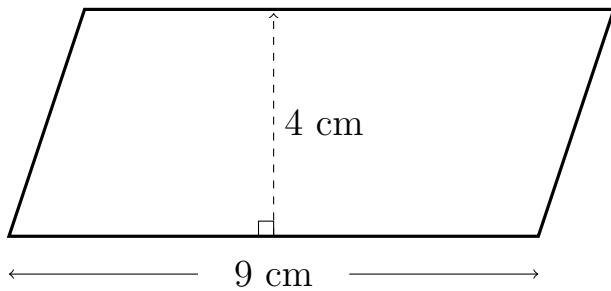


Diagram NOT accurately drawn

Work out the area of the parallelogram.

..... cm^2

3. Here is a parallelogram.

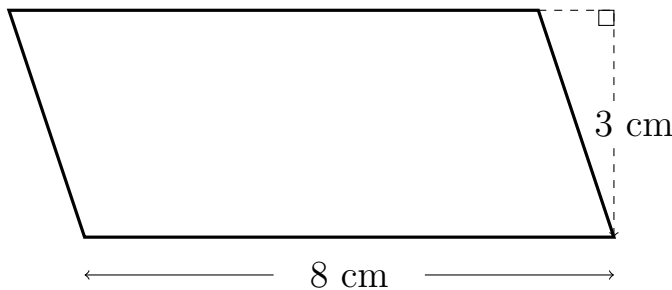


Diagram NOT accurately drawn

The perpendicular height of the parallelogram is 3 cm.

Work out the area of the parallelogram.

..... cm^2

Answers 1a) 15 1b) 12 2) 36 3) 24