

1. Here is a rectangle.

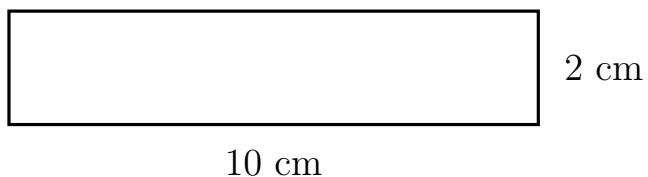


Diagram NOT  
accurately drawn

Work out the area of the rectangle.

.....  $cm^2$

2. Here is a rectangle.

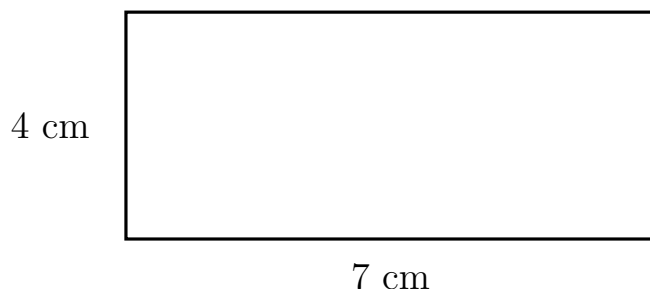


Diagram NOT  
accurately drawn

Work out the area of the rectangle.

.....  $cm^2$

3. Here is a rectangle.

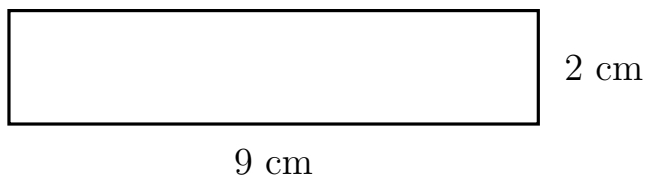


Diagram NOT  
accurately drawn

Work out the area of the rectangle.

.....  $cm^2$

4. Here is a rectangle.

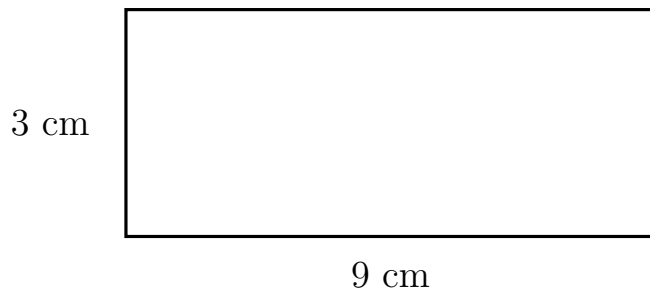


Diagram NOT  
accurately drawn

Work out the area of the rectangle.

.....  $cm^2$

Answers 1) 20   2) 28   3) 18   4) 27