

1. Here is a rectangle.

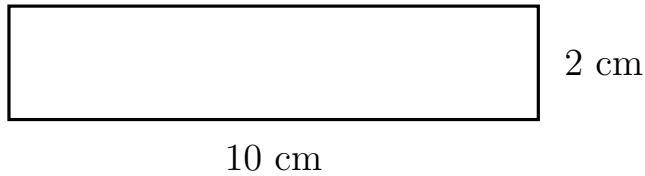


Diagram NOT
accurately drawn

Work out the area of the rectangle.

..... cm^2

2. Here is a rectangle.

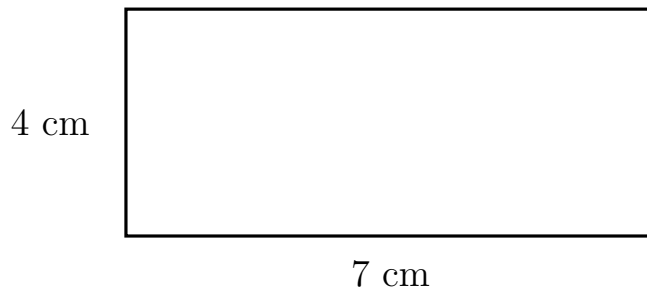


Diagram NOT
accurately drawn

Work out the area of the rectangle.

..... cm^2

3. Here is a rectangle.

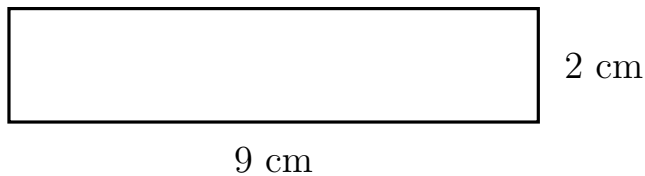


Diagram NOT
accurately drawn

Work out the area of the rectangle.

..... cm^2

4. Here is a rectangle.

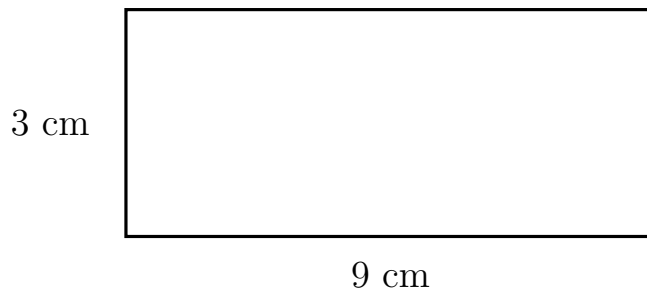


Diagram NOT
accurately drawn

Work out the area of the rectangle.

..... cm^2

Answers 1) 20 2) 28 3) 18 4) 27