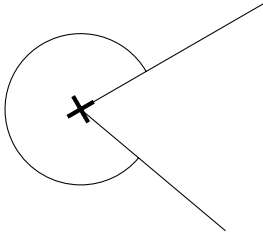
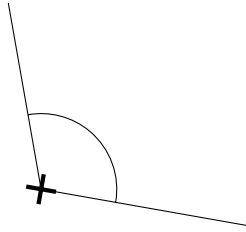


1. Below each angle, write the type of angle.

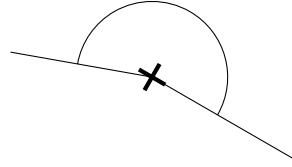
You may use the + sign to help decide if the type of angle is acute, right, obtuse or reflex.



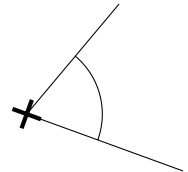
.....



.....



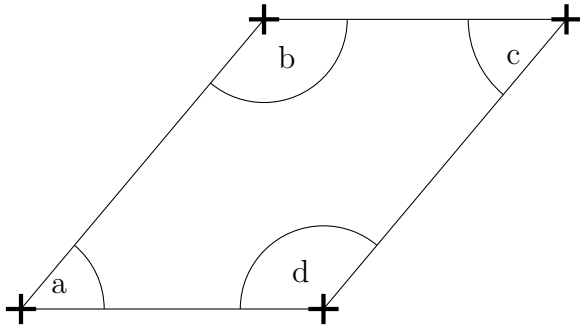
.....



.....

2. Write down the type of angles a, b, c and d.

You may use the + signs to help decide if the type of angle is acute, right, obtuse or reflex.



angle a

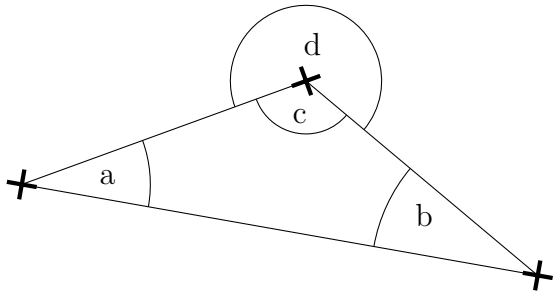
angle b

angle c

angle d

3. Write down the type of angles a, b, c and d.

You may use the + signs to help decide if the type of angle is acute, right, obtuse or reflex.



angle a

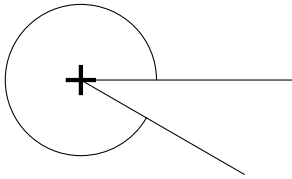
angle b

angle c

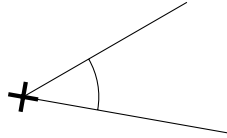
angle d

4. Below each angle, write the type of angle.

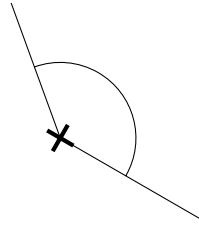
You may use the + sign to help decide if the type of angle is acute, right, obtuse or reflex.



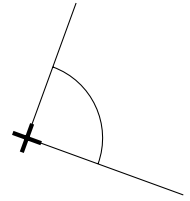
.....



.....



.....



.....

Answers

1. reflex, obtuse, reflex, acute
2. acute, obtuse, acute, obtuse
3. acute, acute, obtuse, reflex
4. reflex, acute, obtuse, right