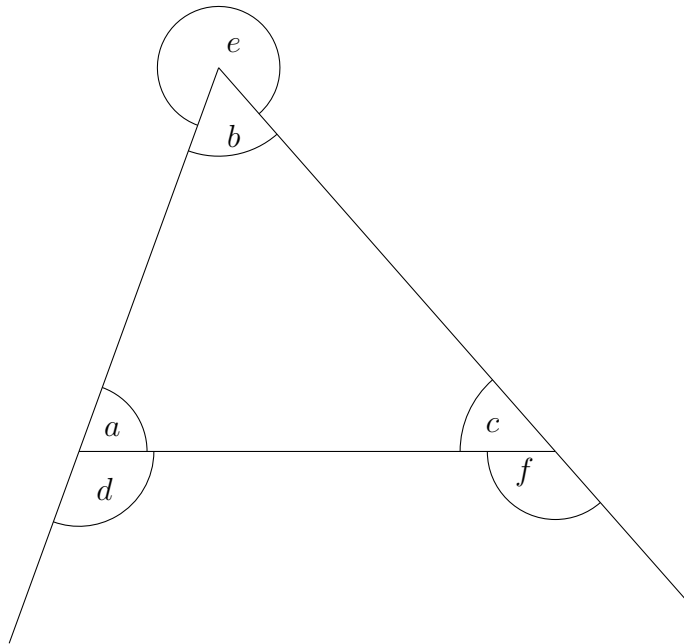


1. Write down the type of angle that these angles are. (The first one has been done for you.)



angle *a* . . . acute . . . . .

angle *b* . . . . .

angle *c* . . . . .

angle *d* . . . . .

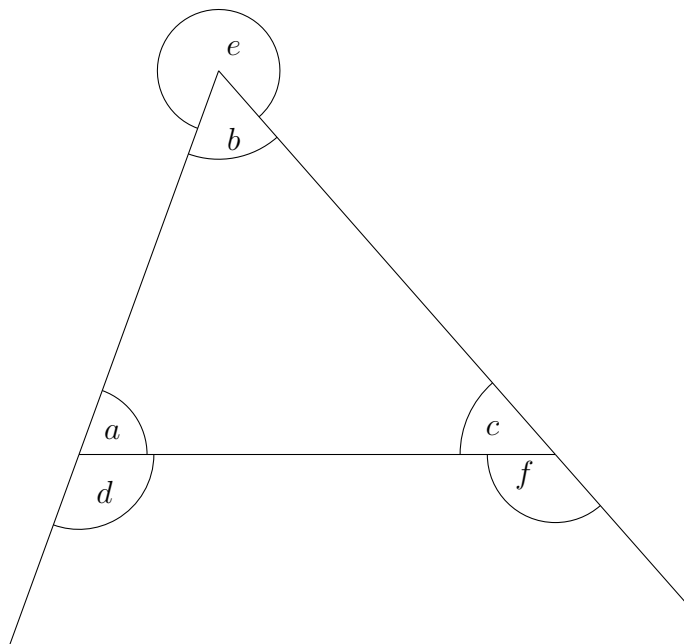
angle *e* . . . . .

angle *f* . . . . .

angle (3) Answers Q1: b) acute c) acute d) obtuse e) reflex f) obtuse

Q2: p) acute q) reflex t) reflex u) obtuse v) acute w) obtuse x) acute y) reflex

1. Write down the type of angle that these angles are. (The first one has been done for you.)



angle *a* . . . acute . . . . .

angle *b* . . . . .

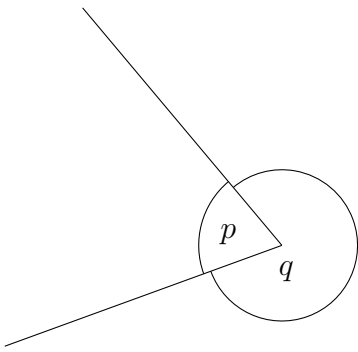
angle *c* . . . . .

angle *d* . . . . .

angle *e* . . . . .

angle *f* . . . . .

2. Write down the type of angle that these angles are.

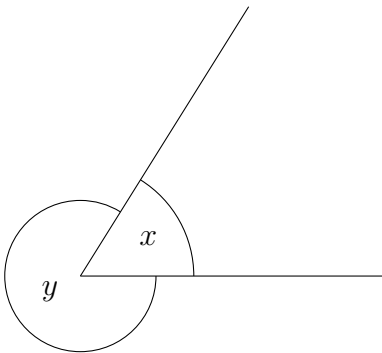
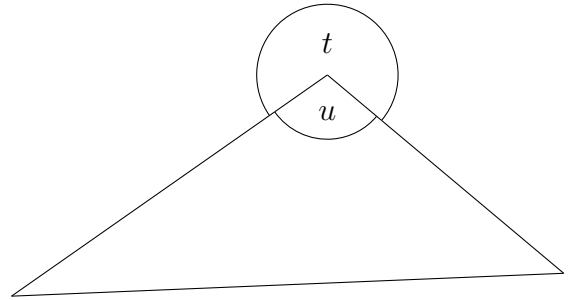


angle  $p$  . . . . .

angle  $q$  . . . . .

angle  $t$  . . . . .

angle  $u$  . . . . .

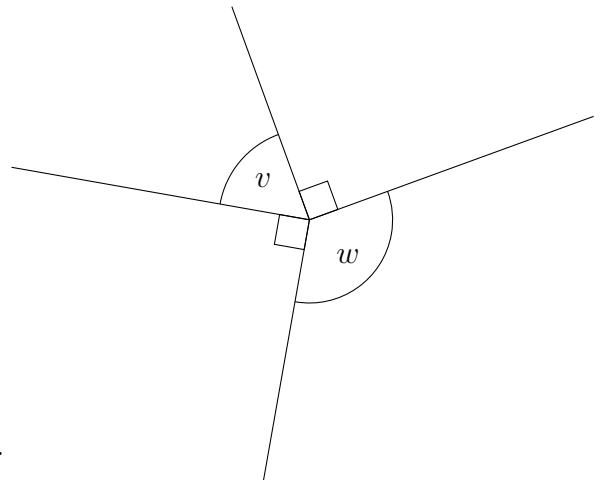


angle  $x$  . . . . .

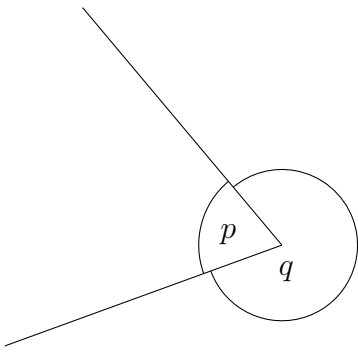
angle  $y$  . . . . .

angle  $v$  . . . . .

angle  $w$  . . . . .



2. Write down the type of angle that these angles are.

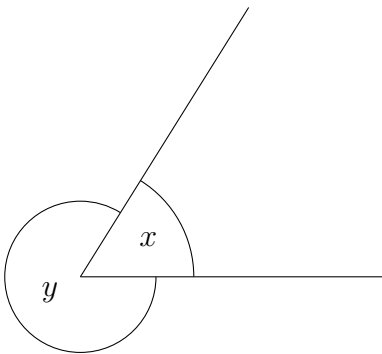
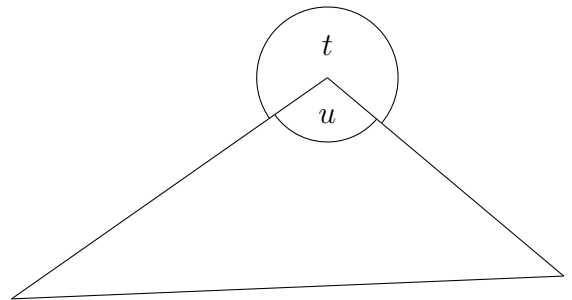


angle  $p$  . . . . .

angle  $q$  . . . . .

angle  $t$  . . . . .

angle  $u$  . . . . .



angle  $x$  . . . . .

angle  $y$  . . . . .

angle  $v$  . . . . .

angle  $w$  . . . . .

