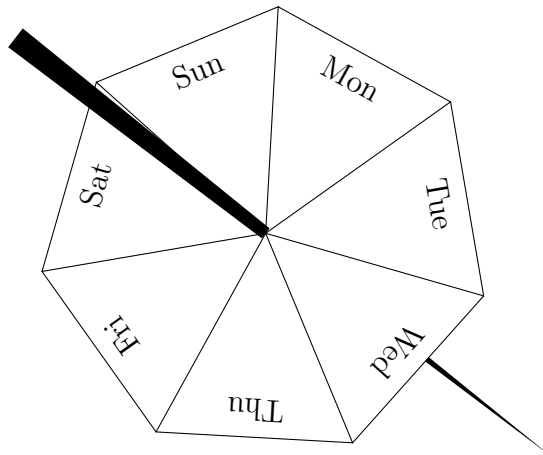


1. Maja has a fair 7-sided spinner.

The sides of the spinner are labelled Mon, Tue, Wed, Thu, Fri, Sat and Sun



Maja spins the spinner once.

Write down the probability that the spinner will land on Mon, Tue, Wed, Thu, or Fri.

1. ....

2. Alex puts these tiles in a bag.

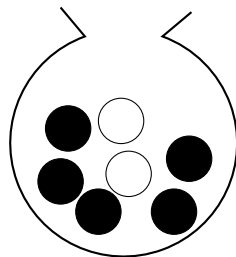


Alex, shakes the bag and takes a tile, at random, from the bag.

Work out the probability that he takes a tile with the letter R on it.

2. ....

3. Here is a bag with some black and white marbles in it.

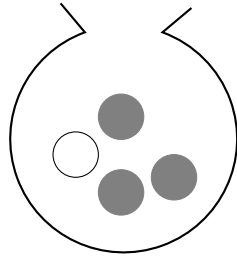


Keeley, shakes the bag and takes a marble, at random, from the bag.

Work out the probability that she takes a black marble.

3. ....

4. Here is a bag with some grey and white marbles in it.



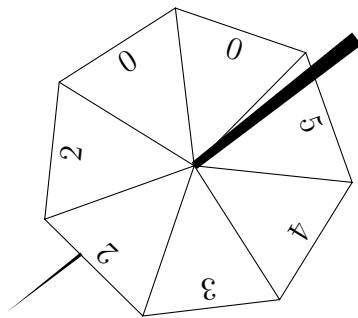
Jannah, shakes the bag and takes a marble, at random, from the bag.

Work out the probability that she takes a grey marble.

4. ....

5. Nadia has a fair 7-sided spinner.

The sides of the spinner are numbered 0, 0, 2, 2, 3, 4 and 5



Nadia spins the spinner once.

Write down the probability that the spinner will land on a 0

5. ....

Q1:  $\frac{5}{7}$

Q2:  $\frac{1}{11}$

Q3:  $\frac{5}{7}$

Q4:  $\frac{3}{4}$

Q5:  $\frac{2}{7}$