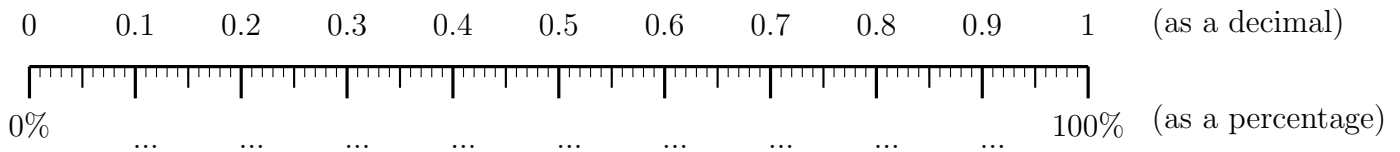
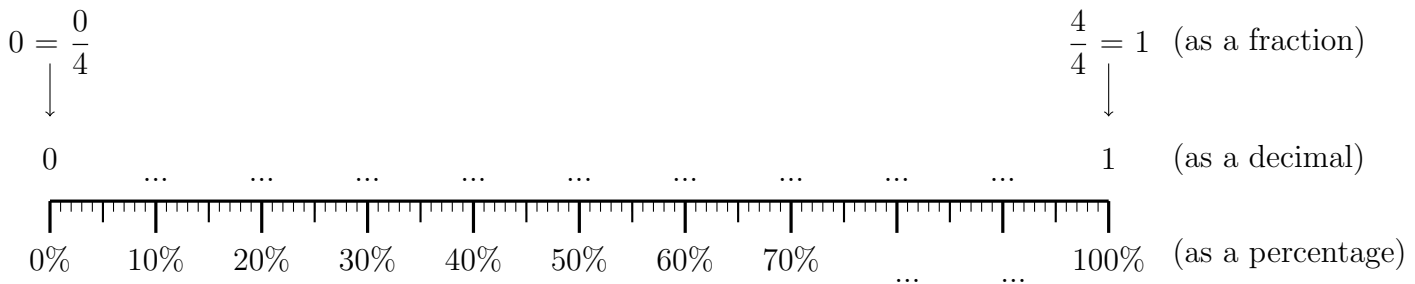


1. Here is an incomplete probability line.



Complete the percentage labels.

2. Here is an incomplete probability line.

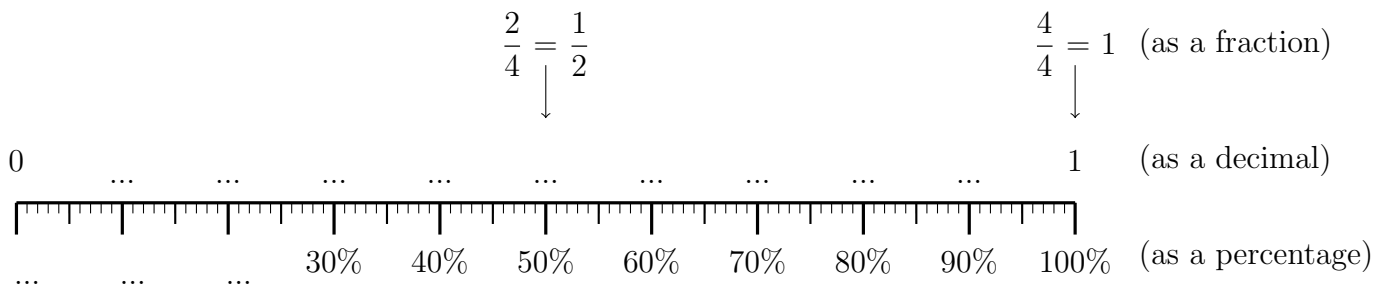


(i) Complete the percentage labels.

(ii) Complete the decimal labels.

(iii) Draw arrows and labels for the fractions  $\frac{1}{4}$ ,  $\frac{2}{4} = \frac{1}{2}$ ,  $\frac{3}{4}$

3. Here is an incomplete probability line.



(i) Complete the percentage labels.

(ii) Complete the decimal labels.

(iii) Draw arrows and labels for the fractions  $\frac{0}{4} = 0$ ,  $\frac{1}{4}$ ,  $\frac{3}{4}$