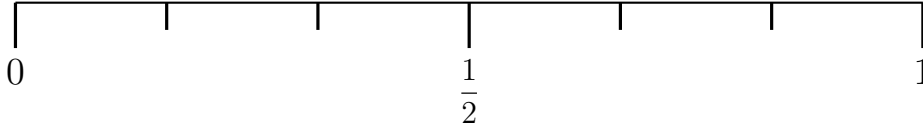


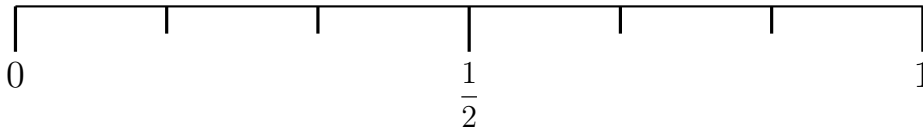
1. Tamara throws a fair coin once.

- (a) On the probability scale below, mark with a cross ( $\times$ ) the probability that Tamara gets tails.



Tamara rolls an ordinary dice once.

- (b) On the probability scale below, mark with a cross ( $\times$ ) the probability that Tamara gets less than 6.



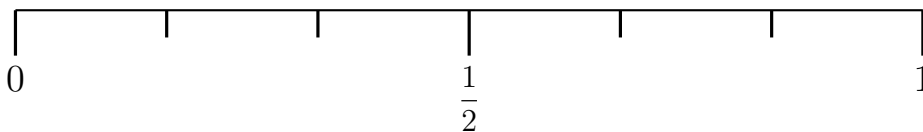

---

probabilitySingle (7) Q1 (a) mark at  $\frac{1}{2} = \frac{3}{6}$ , (b) mark at  $\frac{5}{6}$  Q2 (a) mark at  $\frac{1}{8}$  (b) mark at  $\frac{3}{8}$

---

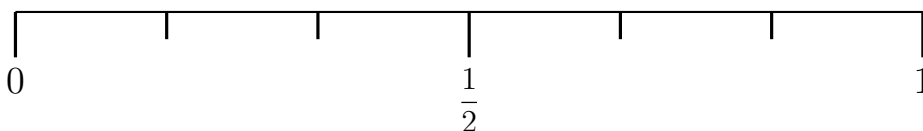
1. Tamara throws a fair coin once.

- (a) On the probability scale below, mark with a cross ( $\times$ ) the probability that Tamara gets tails.



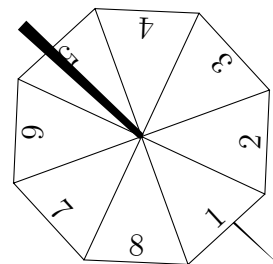
Tamara rolls an ordinary dice once.

- (b) On the probability scale below, mark with a cross ( $\times$ ) the probability that Tamara gets less than 6.



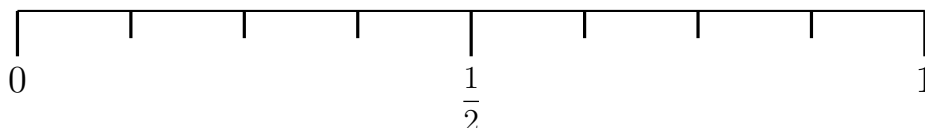
2. Conner has a fair 8-sided spinner.

The sides of the spinner are labelled 1, 2, 3, 4, 5, 6, 7 and 8.



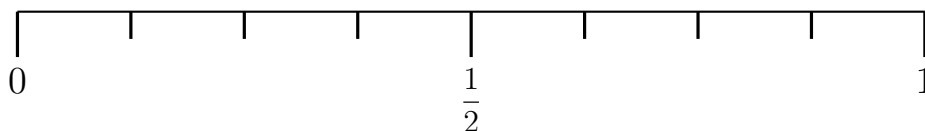
Conner spins the spinner.

- (a) On the probability scale below, mark with a cross (×) the probability that the spinner will land on a 4.



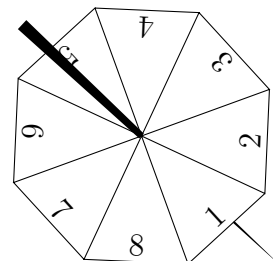
Conner spins the spinner again

- (b) On the probability scale below, mark with a cross (×) the probability that the spinner will land on a number less than 4.



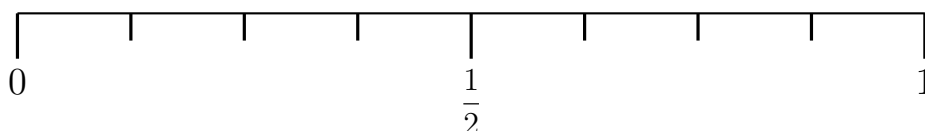
2. Conner has a fair 8-sided spinner.

The sides of the spinner are labelled 1, 2, 3, 4, 5, 6, 7 and 8.



Conner spins the spinner.

- (a) On the probability scale below, mark with a cross (×) the probability that the spinner will land on a 4.



Conner spins the spinner again

- (b) On the probability scale below, mark with a cross (×) the probability that the spinner will land on a number less than 4.

