

1. Paulina puts these tiles in a bag.

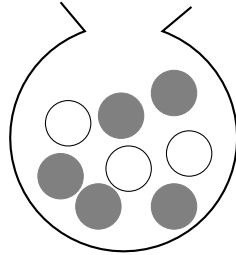


Paulina, shakes the bag and takes a tile, at random, from the bag.

Work out the probability that she takes a tile with the letter R on it.

1.

2. Here is a bag with some grey and white marbles in it.



Leah, shakes the bag and takes a marble, at random, from the bag.

Work out the probability that she takes a grey marble.

2.

probability: single (2) answers Q1: $\frac{2}{13}$ Q2: $\frac{5}{8}$ Q3: $\frac{4}{15}$ Q4: $\frac{2}{5}$

1. Paulina puts these tiles in a bag.

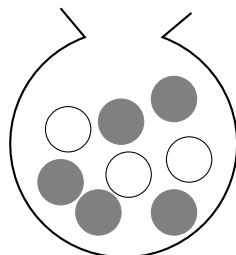


Paulina, shakes the bag and takes a tile, at random, from the bag.

Work out the probability that she takes a tile with the letter R on it.

1.

2. Here is a bag with some grey and white marbles in it.



Leah, shakes the bag and takes a marble, at random, from the bag.

Work out the probability that she takes a grey marble.

2.

3. Charlie puts these tiles in a bag.

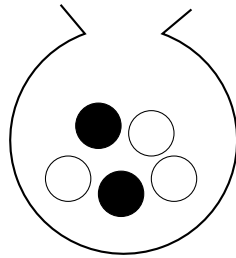


Charlie, shakes the bag and takes a tile, at random, from the bag.

Work out the probability that he takes a tile with 4 on it.

3.

4. Here is a bag with some black and white marbles in it.



Kane, shakes the bag and takes a marble, at random, from the bag.

Work out the probability that he takes a black marble.

4.

3. Charlie puts these tiles in a bag.

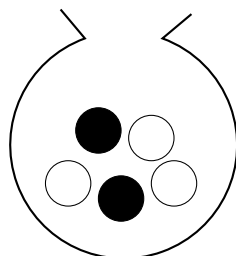


Charlie, shakes the bag and takes a tile, at random, from the bag.

Work out the probability that he takes a tile with 4 on it.

3.

4. Here is a bag with some black and white marbles in it.



Kane, shakes the bag and takes a marble, at random, from the bag.

Work out the probability that he takes a black marble.

4.