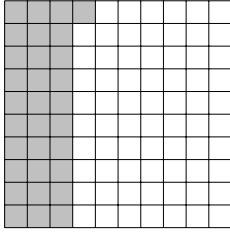


1. Part of this 100 square is shaded.

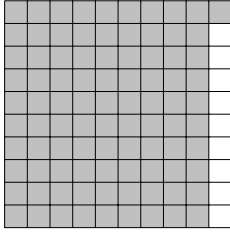


Write down the

(i) fraction shaded . . . . .

(ii) percentage shaded . . . . . %

2. Part of this 100 square is shaded.




Write down the

(i) fraction shaded . . . . .

(ii) percentage shaded . . . . . %

3. Part of this 100 square is shaded.

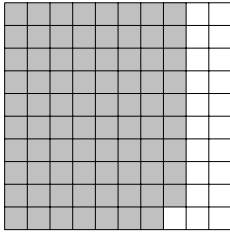


Write down the

(i) fraction shaded . . . . .

(ii) percentage shaded . . . . . %

4. Part of this 100 square is shaded.



Write down the

(i) fraction shaded . . . . .

(ii) percentage shaded . . . . . %

## Answers

1. (i)  $\frac{31}{100}$   
(ii) 31 %
2. (i)  $\frac{91}{100}$   
(ii) 91 %
3. (i)  $\frac{99}{100}$   
ii) 99 %
4. (i)  $\frac{79}{100}$   
(ii) 79 %