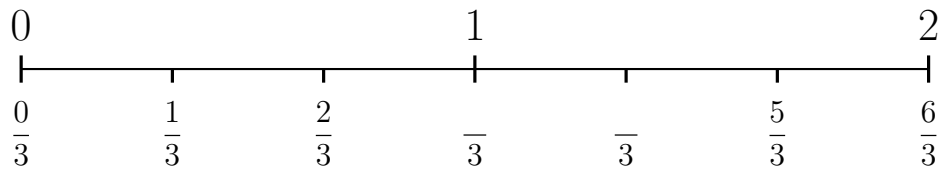


1. Here is an incomplete number line.

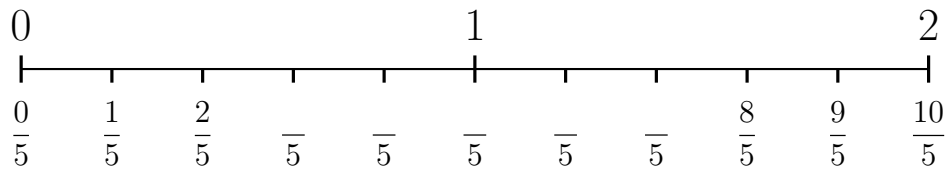


(i) Complete the missing labels

(ii) Work out $\frac{2}{3} - \frac{1}{3}$

1.

2. Here is an incomplete number line.

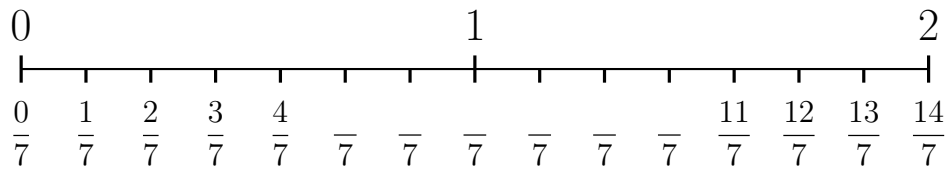


(i) Complete the missing labels

(ii) Work out $\frac{6}{5} - \frac{3}{5}$

2.

3. Here is an incomplete number line.

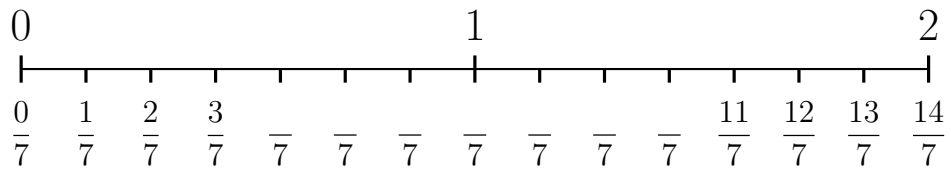


(i) Complete the missing labels

(ii) Work out $\frac{5}{7} + \frac{2}{7}$

3.

4. Here is an incomplete number line.



(i) Complete the missing labels

(ii) Work out $\frac{4}{7} - \frac{2}{7}$

4.

Answers

1. (ii) $\frac{1}{3}$

2. (ii) $\frac{3}{5}$

3. (ii) $\frac{7}{7}$ or 1

4. (ii) $\frac{2}{7}$