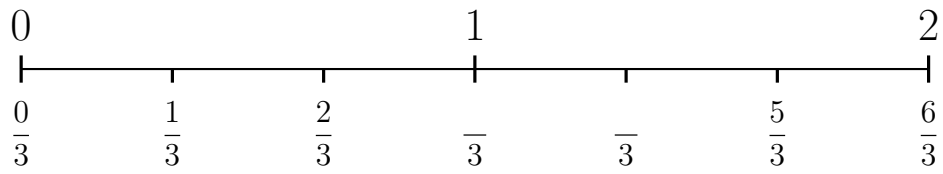


1. Here is an incomplete number line.

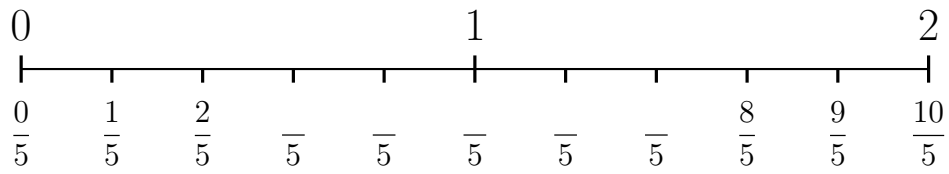


(i) Complete the missing labels

(ii) Work out  $\frac{2}{3} - \frac{1}{3}$

1. ....

2. Here is an incomplete number line.

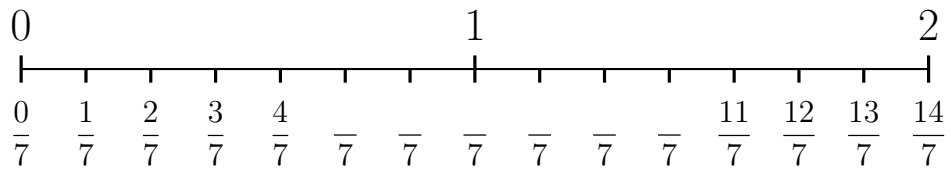


(i) Complete the missing labels

(ii) Work out  $\frac{6}{5} - \frac{3}{5}$

2. ....

3. Here is an incomplete number line.

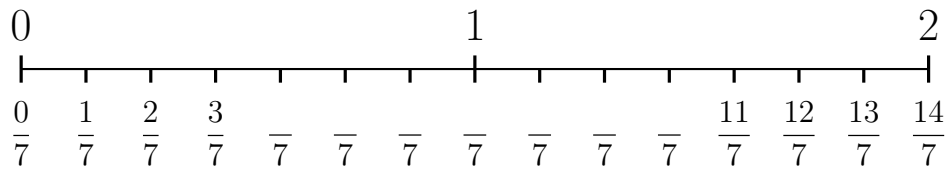


(i) Complete the missing labels

(ii) Work out  $\frac{5}{7} + \frac{2}{7}$

3. ....

4. Here is an incomplete number line.



(i) Complete the missing labels

(ii) Work out  $\frac{4}{7} - \frac{2}{7}$

4. ....

## Answers

1. (ii)  $\frac{1}{3}$

2. (ii)  $\frac{3}{5}$

3. (ii)  $\frac{7}{7}$  or 1

4. (ii)  $\frac{2}{7}$