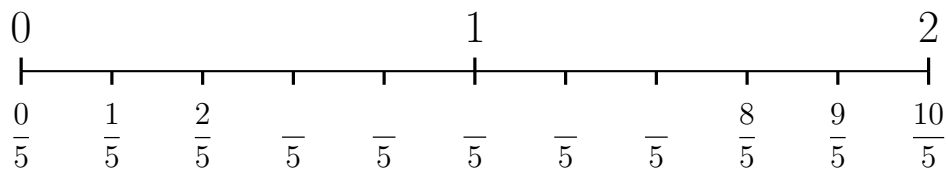


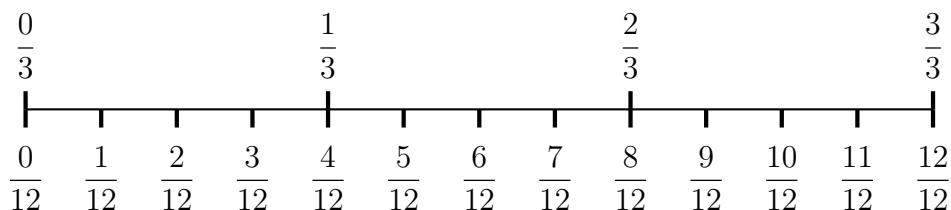
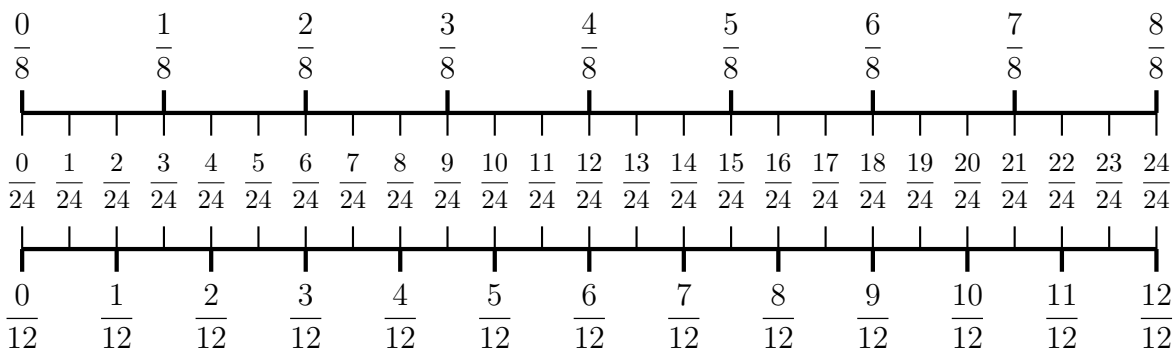
1.

1. not written yet

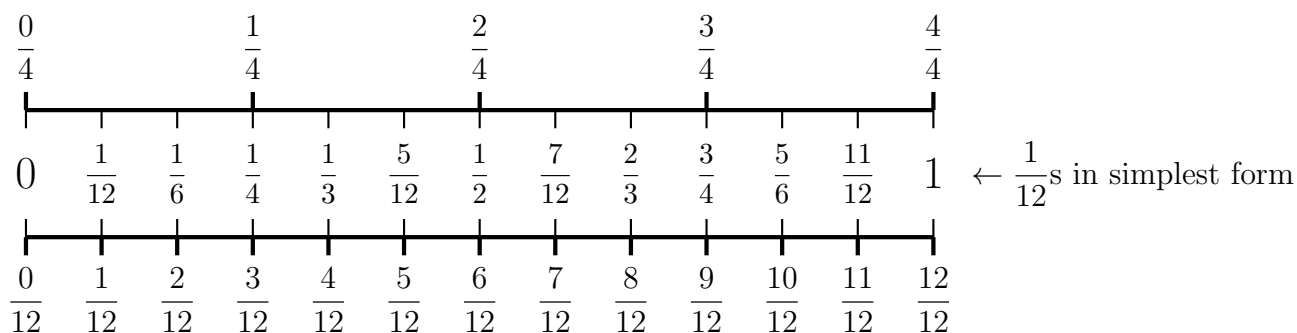
2. Here is an incomplete number line.



(i) Complete the missing labels

(ii) Work out  $\frac{4}{5} + \frac{1}{5}$ 3. (a) Work out  $\frac{2}{5} + \frac{4}{5}$ (b) Work out  $\frac{6}{7} - \frac{1}{7}$ 4. Use this number line to complete  $\frac{5}{12} - \frac{1}{3} = \frac{\quad}{12} - \frac{\quad}{12} = \frac{\quad}{12}$ 5. (a) Work out  $\frac{1}{3} + \frac{2}{9}$ (b) Work out  $\frac{3}{4} - \frac{5}{8}$ 6. Use this number line to complete  $\frac{11}{12} - \frac{3}{8} = \frac{\quad}{24} - \frac{\quad}{24} = \frac{\quad}{24}$ 

7. Use this number line to complete  $\frac{5}{12} + \frac{1}{4} = \frac{\quad}{12} + \frac{\quad}{12} = \frac{\quad}{12} = \text{---}$  (in simplest form)



8. Work out  $\frac{1}{2} + \frac{1}{6}$

Give your answer in its simplest form.

9. (a) Work out  $\frac{1}{3} + \frac{1}{4}$

- (b) Work out  $\frac{5}{7} - \frac{2}{5}$

10. (a) Work out  $\frac{5}{6} - \frac{3}{8}$

Give your answer in its simplest form.

- (b) Work out  $\frac{3}{20} + \frac{7}{30}$

Give your answer in its simplest form.

11. (a) Work out  $3\frac{7}{10} - 1\frac{2}{5}$

- (b) Work out  $2\frac{1}{2} + 2\frac{1}{3}$

12.

12. not written yet

13. (a) Work out  $2\frac{1}{6} - 1\frac{1}{3}$

- (b) Work out  $1\frac{7}{20} + 2\frac{4}{5}$