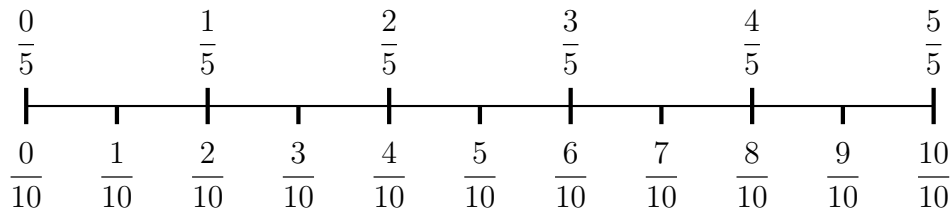
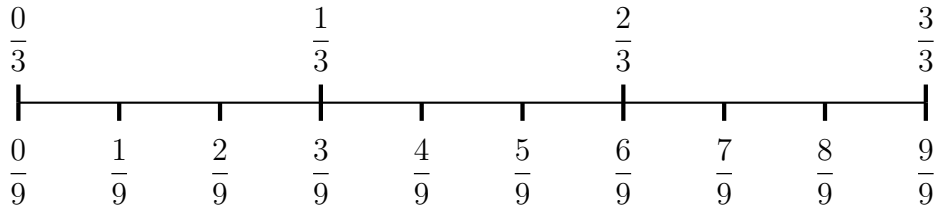


1. Use this number line to complete $\frac{2}{5} - \frac{1}{10} = \frac{\quad}{10} + \frac{\quad}{10} = \frac{\quad}{10}$



2. Here is a number line.

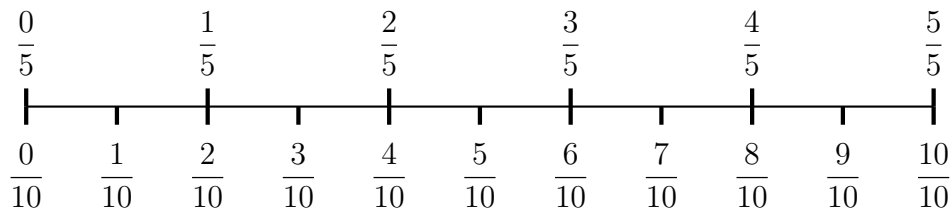


Complete (i) $\frac{1}{3} + \frac{1}{9} = \frac{\quad}{9} + \frac{\quad}{9} = \frac{\quad}{9}$

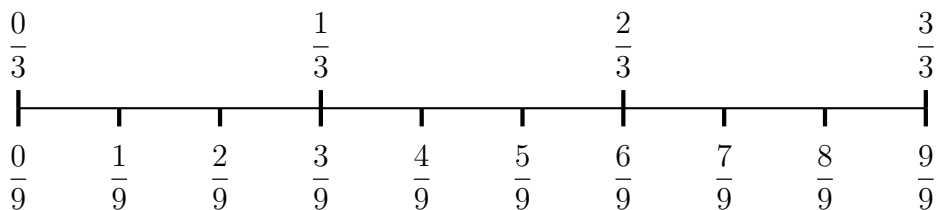
(ii) $\frac{7}{9} - \frac{2}{3} = \frac{\quad}{9} - \frac{\quad}{9} = \frac{\quad}{9}$

fraction + / - (4) Q1: $\frac{3}{10}$, Q2(i) $\frac{4}{9}$, (ii) $\frac{1}{9}$, Q3 (i) $\frac{7}{12}$, (ii) $\frac{5}{12}$, Q4 (i) $\frac{11}{15}$, (ii) $\frac{1}{15}$

1. Use this number line to complete $\frac{2}{5} - \frac{1}{10} = \frac{\quad}{10} + \frac{\quad}{10} = \frac{\quad}{10}$



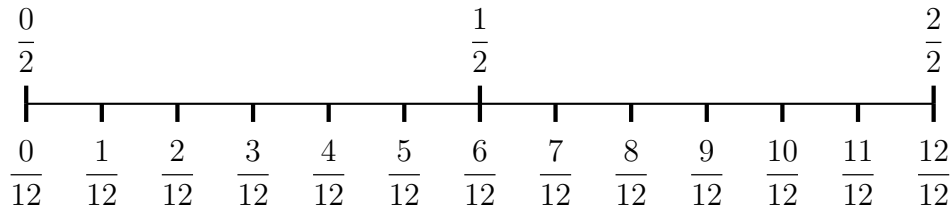
2. Here is a number line.



Complete (i) $\frac{1}{3} + \frac{1}{9} = \frac{\quad}{9} + \frac{\quad}{9} = \frac{\quad}{9}$

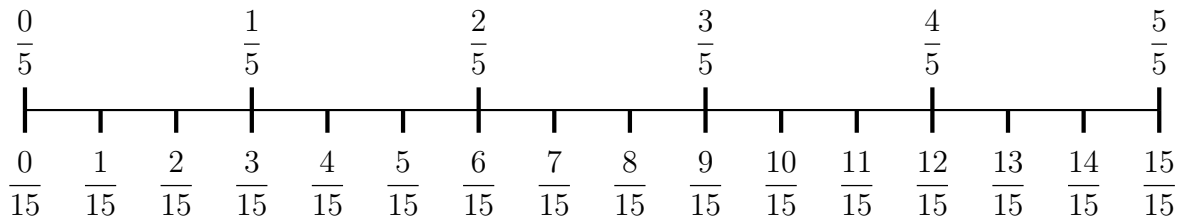
(ii) $\frac{7}{9} - \frac{2}{3} = \frac{\quad}{9} - \frac{\quad}{9} = \frac{\quad}{9}$

3. You may use this number line



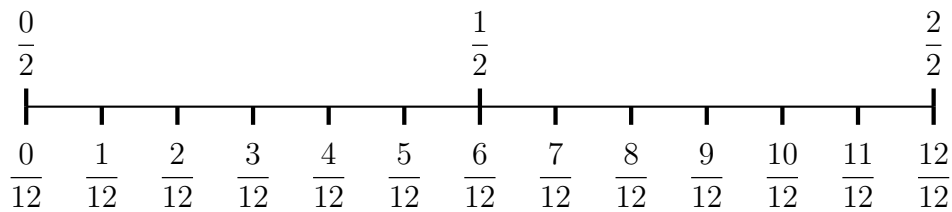
Complete (i) $\frac{1}{2} + \frac{1}{12} = \frac{\quad}{12} + \frac{\quad}{12} = \frac{\quad}{12}$ (ii) $\frac{11}{12} - \frac{1}{2} = \frac{\quad}{12} - \frac{\quad}{12} = \frac{\quad}{12}$

4. Here is a number line.



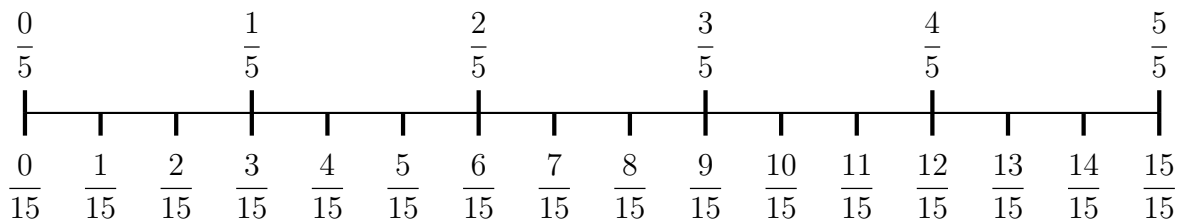
Complete (i) $\frac{3}{5} + \frac{2}{15} = \frac{\quad}{15} + \frac{\quad}{15} = \frac{\quad}{15}$ (ii) $\frac{7}{15} - \frac{2}{5} = \frac{\quad}{15} - \frac{\quad}{15} = \frac{\quad}{15}$

3. You may use this number line



Complete (i) $\frac{1}{2} + \frac{1}{12} = \frac{\quad}{12} + \frac{\quad}{12} = \frac{\quad}{12}$ (ii) $\frac{11}{12} - \frac{1}{2} = \frac{\quad}{12} - \frac{\quad}{12} = \frac{\quad}{12}$

4. Here is a number line.



Complete (i) $\frac{3}{5} + \frac{2}{15} = \frac{\quad}{15} + \frac{\quad}{15} = \frac{\quad}{15}$ (ii) $\frac{7}{15} - \frac{2}{5} = \frac{\quad}{15} - \frac{\quad}{15} = \frac{\quad}{15}$