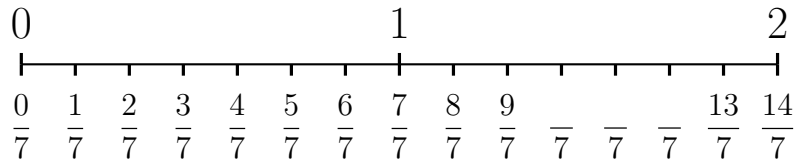
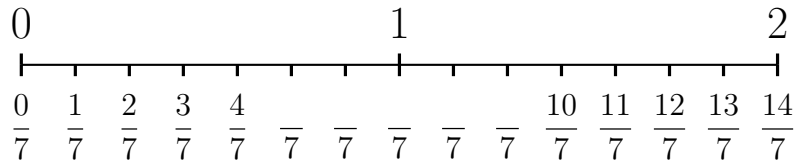


1 (i) Complete the labels on this number line



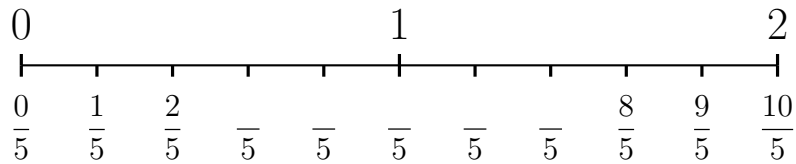
(ii) Work out $\frac{5}{7} + \frac{2}{7}$

2 (i) Complete the labels on this number line



(ii) Work out $\frac{4}{7} - \frac{2}{7}$

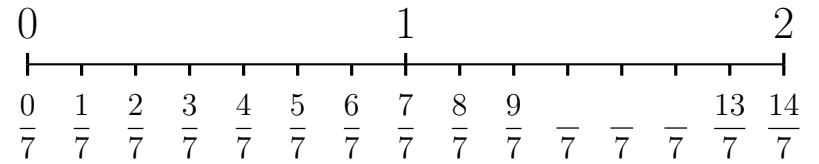
3 (i) Complete the labels on this number line



(ii) Work out $\frac{6}{5} - \frac{3}{5}$

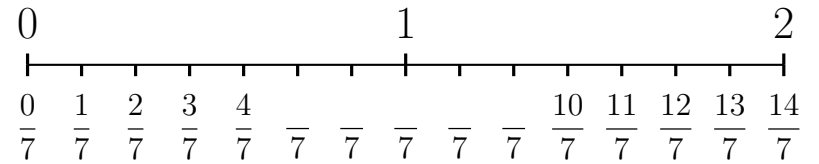
Turn over for more questions and answers

1 (i) Complete the labels on this number line



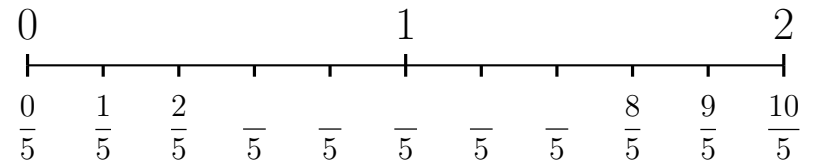
(ii) Work out $\frac{5}{7} + \frac{2}{7}$

2 (i) Complete the labels on this number line



(ii) Work out $\frac{4}{7} - \frac{2}{7}$

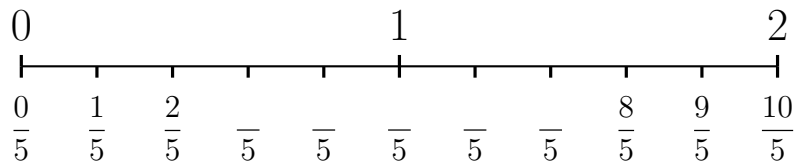
3 (i) Complete the labels on this number line



(ii) Work out $\frac{6}{5} - \frac{3}{5}$

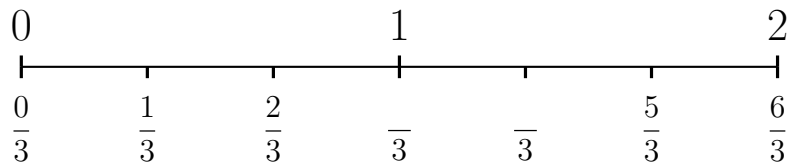
Turn over for more questions and answers

4 (i) Complete the labels on this number line




(ii) Work out $\frac{4}{5} + \frac{4}{5}$

5 (i) Complete the labels on this number line



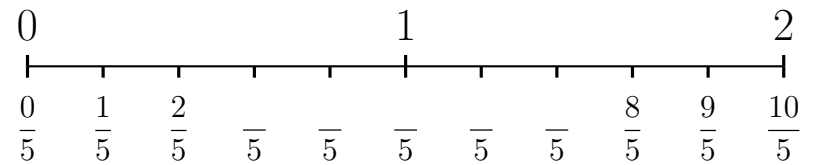
(ii) Work out $\frac{4}{3} - \frac{2}{3}$

6 (i) Complete the labels on this number line



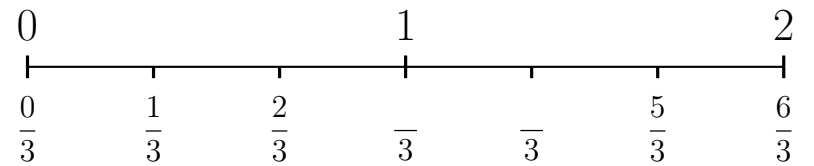
(ii) Work out $\frac{2}{3} - \frac{1}{3}$

4 (i) Complete the labels on this number line



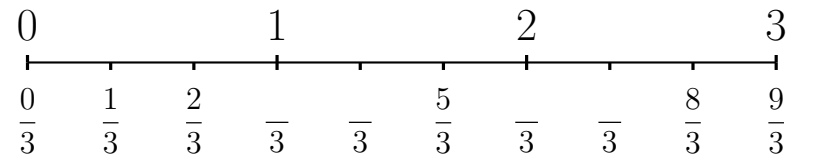
(ii) Work out $\frac{4}{5} + \frac{4}{5}$

5 (i) Complete the labels on this number line



(ii) Work out $\frac{4}{3} - \frac{2}{3}$

6 (i) Complete the labels on this number line



(ii) Work out $\frac{2}{3} - \frac{1}{3}$

Answers Q1: $\frac{7}{5}$ or 1 Q2: $\frac{2}{5}$ Q3: $\frac{3}{5}$ Q4: $\frac{8}{5}$ Q5: $\frac{2}{3}$ Q6: $\frac{1}{3}$

Answers Q1: $\frac{7}{5}$ or 1 Q2: $\frac{2}{5}$ Q3: $\frac{3}{5}$ Q4: $\frac{8}{5}$ Q5: $\frac{2}{3}$ Q6: $\frac{1}{3}$