



(1) Shade in $\frac{2}{3}$ of this rectangle.




(1) Shade in $\frac{2}{3}$ of this rectangle.



(2) Shade in $\frac{4}{5}$ of this rectangle.




(2) Shade in $\frac{4}{5}$ of this rectangle.




(3) Shade in $\frac{5}{7}$ of this rectangle.




(3) Shade in $\frac{5}{7}$ of this rectangle.



(4) Shade in $\frac{3}{4}$ of this rectangle.




(4) Shade in $\frac{3}{4}$ of this rectangle.



(5) Shade in $\frac{5}{6}$ of this rectangle.



(5) Shade in $\frac{5}{6}$ of this rectangle.



Turn over for more questions

Turn over for more questions


(6) Shade in $\frac{6}{7}$ of this rectangle.




(6) Shade in $\frac{6}{7}$ of this rectangle.




(7) Shade in $\frac{2}{5}$ of this rectangle.



(7) Shade in $\frac{2}{5}$ of this rectangle.




(8) Shade in $\frac{3}{8}$ of this rectangle.




(8) Shade in $\frac{3}{8}$ of this rectangle.




(9) Shade in $\frac{3}{5}$ of this rectangle.



(9) Shade in $\frac{3}{5}$ of this rectangle.



(10) Shade in $\frac{4}{7}$ of this rectangle.



(10) Shade in $\frac{4}{7}$ of this rectangle.

