



(1) Shade in $\frac{1}{3}$ of this rectangle.




(1) Shade in $\frac{1}{3}$ of this rectangle.



(2) Shade in $\frac{1}{5}$ of this rectangle.




(2) Shade in $\frac{1}{5}$ of this rectangle.




(3) Shade in $\frac{1}{7}$ of this rectangle.




(3) Shade in $\frac{1}{7}$ of this rectangle.



(4) Shade in $\frac{1}{4}$ of this rectangle.




(4) Shade in $\frac{1}{4}$ of this rectangle.



(5) Shade in $\frac{1}{6}$ of this rectangle.



(5) Shade in $\frac{1}{6}$ of this rectangle.




Turn over for more questions

Turn over for more questions


(6) Shade in $\frac{1}{2}$ of this rectangle.




(6) Shade in $\frac{1}{2}$ of this rectangle.




(7) Shade in $\frac{1}{3}$ of this rectangle.



(7) Shade in $\frac{1}{3}$ of this rectangle.




(8) Shade in $\frac{1}{8}$ of this rectangle.




(8) Shade in $\frac{1}{8}$ of this rectangle.




(9) Shade in $\frac{1}{5}$ of this rectangle.



(9) Shade in $\frac{1}{5}$ of this rectangle.



(10) Shade in $\frac{1}{7}$ of this rectangle.



(10) Shade in $\frac{1}{7}$ of this rectangle.

