



1. Complete $\frac{1}{2} = \frac{\quad}{8}$

You may use this dotted paper to draw fractions




2. Complete $\frac{2}{3} = \frac{\quad}{6}$

You may use this dotted paper to draw fractions




3. Complete $\frac{3}{8} = \frac{\quad}{40}$

You may use this dotted paper to draw fractions



4. Complete $\frac{3}{8} = \frac{\quad}{80}$

You may use this dotted paper to draw fractions



Answers

1. $\frac{4}{8}$

2. $\frac{4}{6}$

3. $\frac{15}{40}$

4. $\frac{30}{80}$