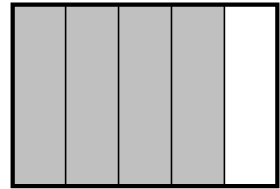
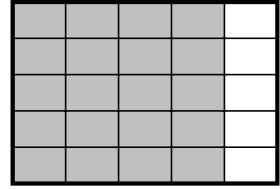
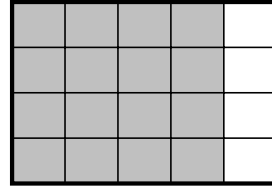
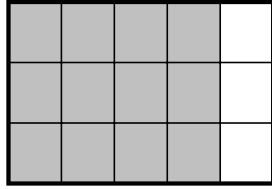
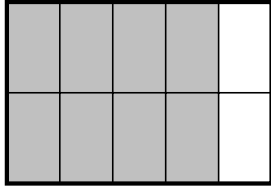


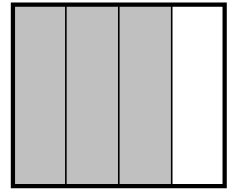
1. Complete $\frac{4}{5} = \frac{\quad}{15}$



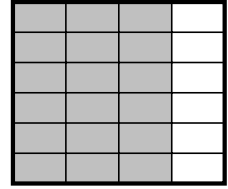
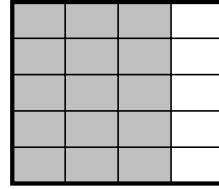
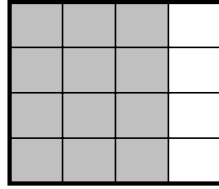
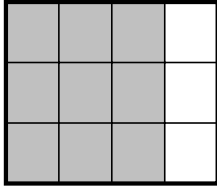
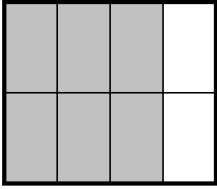
You may use these equivalent fraction diagrams



2. Complete $\frac{3}{4} = \frac{\quad}{24}$

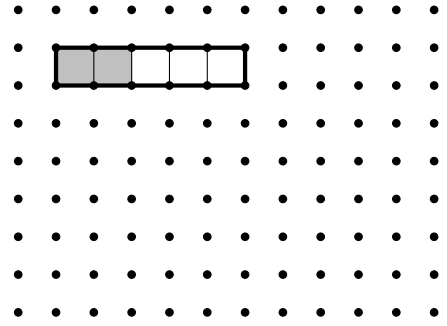


You may use these equivalent fraction diagrams



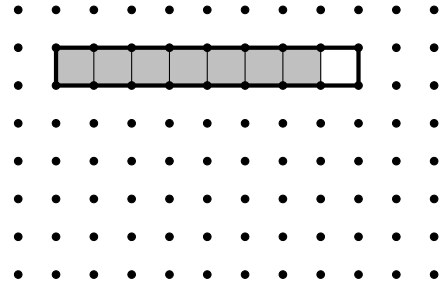
3. Complete $\frac{2}{5} = \frac{\quad}{15}$

You may draw another fraction on this dotted paper



4. Complete $\frac{7}{8} = \frac{\quad}{32}$

You may draw another fraction on this dotted paper



Answers

1. 12
2. 18
3. 6
4. 28