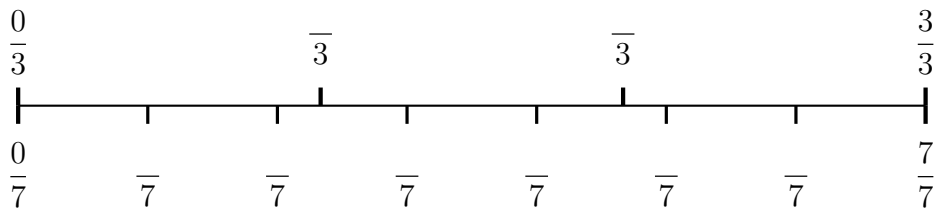


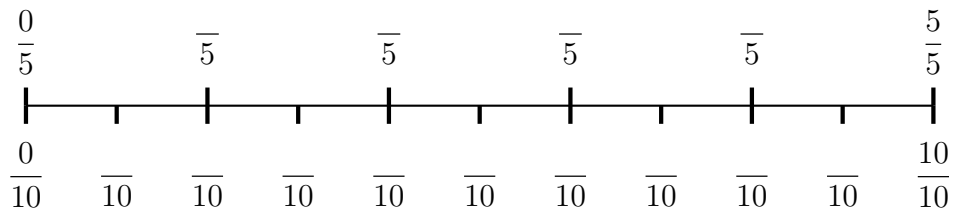
1. (i) Complete the fraction labels on this number line.



- (ii) Which is larger  $\frac{2}{3}$  or  $\frac{4}{7}$ ?

1. ....

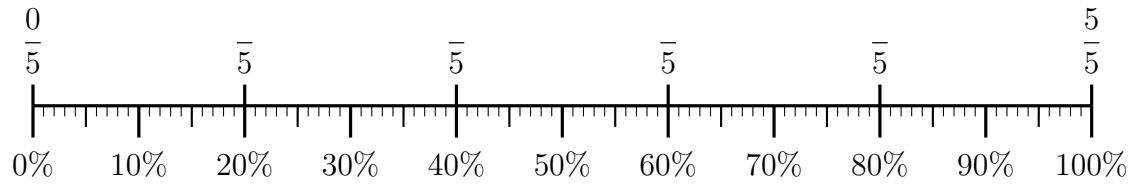
2. (i) Complete the labels on the number line.



(ii) Complete  $\frac{1}{5} = \frac{\quad}{10}$

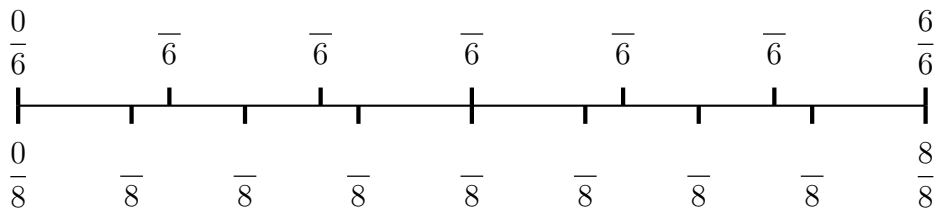
2. ....

3. (i) Complete the labels on the number line.



(ii) Complete  $20\% = \frac{\quad}{100} = \frac{\quad}{5}$

4. (i) Complete the labels on the number line.

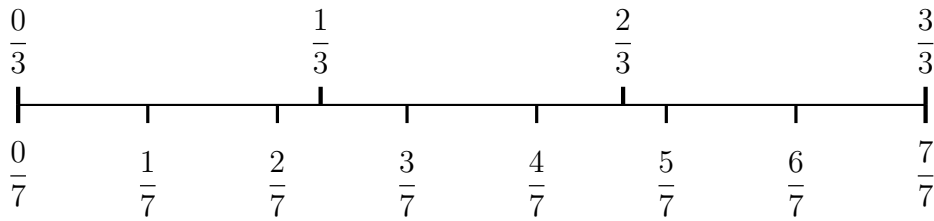


(ii) Which is larger  $\frac{1}{6}$  or  $\frac{1}{8}$ ?

4. ....

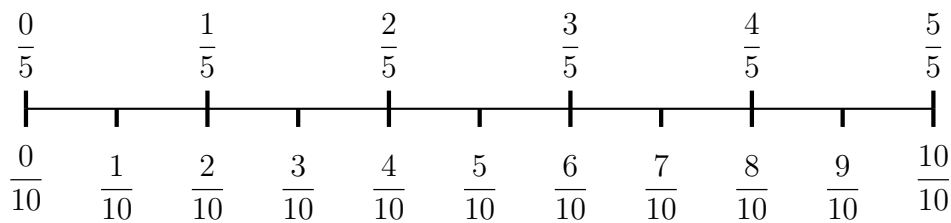
Answers

1. (i)



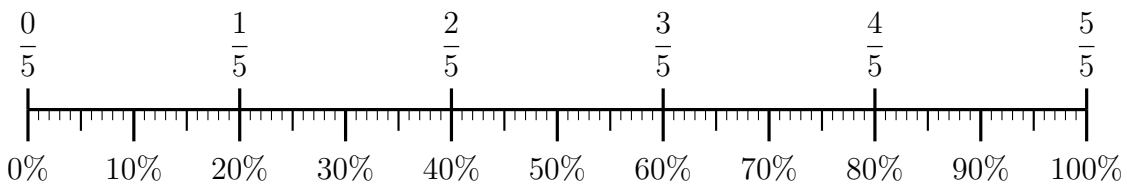
(ii)  $\frac{2}{3}$

2. (i)



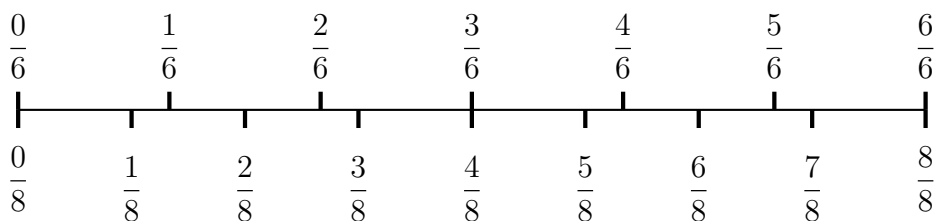
(ii)  $\frac{1}{5} = \frac{2}{10}$

3. (i)



(ii) (ii)  $20\% = \frac{20}{100} = \frac{1}{5}$

4. (i)



(ii)  $\frac{1}{6}$