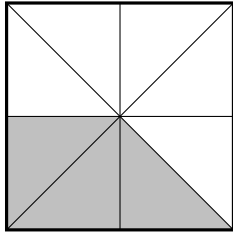


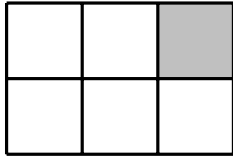
1. Part of this shape is shaded.



Write down the fraction of the shape that is shaded.

1.

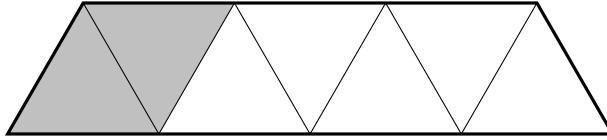
2. Part of this shape is shaded.



Write down the fraction of the shape that is shaded.

2.

3. Part of this shape is shaded.



Write down the fraction of the shape that is shaded.

3.

4. Part of this shape is shaded.



Write down the fraction of the shape that is shaded.

4.

Answers

1. $\frac{3}{8}$

2. $\frac{1}{6}$

3. $\frac{2}{7}$

4. $\frac{5}{6}$