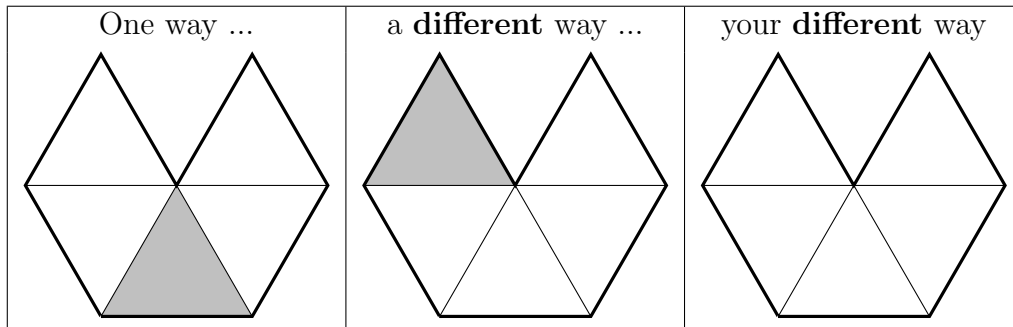


1. The teacher said “Shade  $\frac{1}{5}$  of this shape in **different** ways.”

Here are two **different** ways.

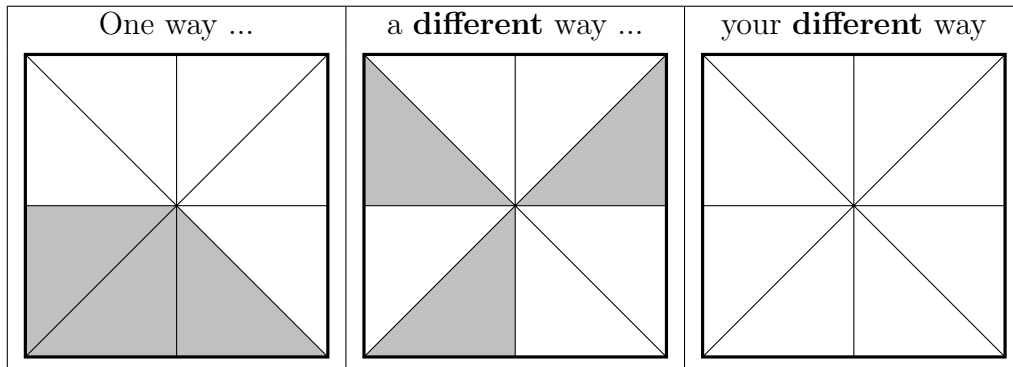
Complete another **different** way.



2. The teacher said “Shade  $\frac{3}{8}$  of this shape in **different** ways.”

Here are two **different** ways.

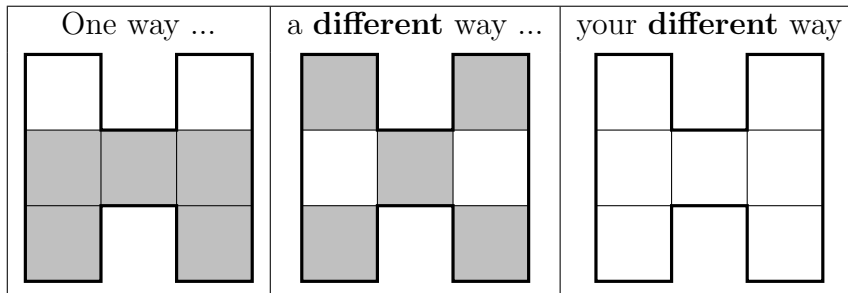
Complete another **different** way.



3. The teacher said “Shade  $\frac{5}{7}$  of this shape in **different** ways.”

Here are two **different** ways.

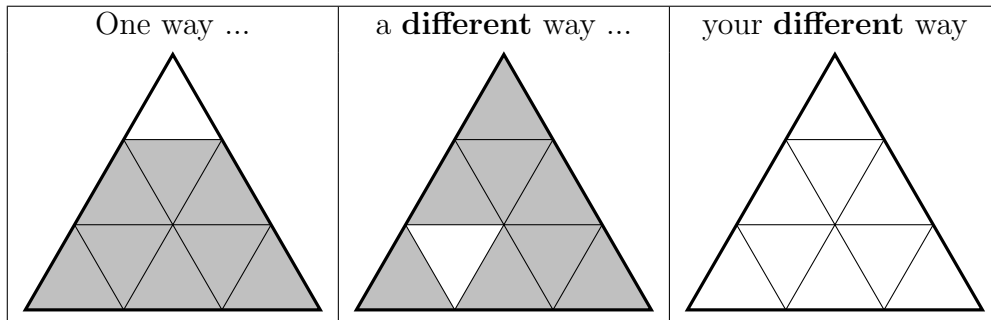
Complete another **different** way.



4. The teacher said “Shade  $\frac{8}{9}$  of this shape in **different** ways.”

Here are two **different** ways.

Complete another **different** way.



## Answers

1.  $\frac{1}{5}$  shaded in a different way
2.  $\frac{3}{8}$  shaded in a different way
3.  $\frac{5}{7}$  shaded in a different way
4.  $\frac{8}{9}$  shaded in a different way