




1. Shade in $\frac{5}{6}$ of this rectangle.



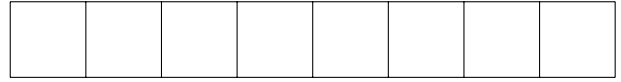
2. Shade in $\frac{2}{3}$ of this rectangle.



3. Shade in $\frac{4}{5}$ of this rectangle.



4. Shade in $\frac{3}{8}$ of this rectangle.



Answers

1. $\frac{5}{6}$ is shaded
2. $\frac{2}{3}$ is shaded
3. $\frac{4}{5}$ is shaded
4. $\frac{3}{8}$ is shaded